

KVS, ZONAL INSTITUTE OF EDUCATION &
TRAINING, CHANDIGARH



Competency Based Questions

CLASS : III

(All Subjects)

Mentor

Shri. Mukesh Kumar

Dy. Commissioner and Director

Edited & Compiled by

1. Sh. Vipin Kumar, TA(Primary)
2. Sh. Ranajit Kondhare, TA(Primary)

Unit 1 : GOOD MORNING/THE MAGIC GARDEN

1. Write 5 sentences about my garden (3 Marks)

2. Why did the flowers love the children? (2 Marks)

3. Name 5 flowers growing in the magic garden (2 Marks)

4. Whom does the child say "good morning"? (2 Marks)

1. Write the opposite of:- (3 Marks)

a) Pretty x _____ b) happy x _____ c) day x _____

2. Use "is/are":- (3 Marks)

- a) The flowers -----looking pretty
- b) Children -----playing in the park
- c) Ram -----sitting under a tree.

3. Encircle the odd word (3 Marks)

- a) Flower Root stem bird
- b) Tomato Lilly Radish Potato
- c) Cauliflower, Marigold, Lotus, Tulip

4. Make sentences of your own (3 Marks)

a) Sky, _____

b) Birds _____

c) Trees _____

5. Write the past tense of:- (3 Marks)

a) Fall _____ b) Make _____ c) Laugh _____

6. Name three insects _____, _____, _____ (3 Marks)

7. Who said to whom:- (3 Marks)

a) "They are kind and bring bread for us" _____

b) "I love marigold in its golden dress" _____

c) "I love all the children" _____

8. Give rhyming words:- (3 Marks)

a) sun _____ b) trees _____ c) day _____

PART-C

1. Choose the right word:- (2 Marks)

a) A _____ dog (big/tasty)

b) A _____ tree (blue/green)

2. Encircle the odd word (2 Marks)

a) root, stem, flower, dog

b) trunk, branch, house, leaves

3. Write the plurals of:- (1 Mark)

a) wing _____ song _____

4. Name any two birds mentioned in the poem "Bird talk" (1 Mark)

Class: III
Sub : ENGLISH
Unit 2 : BIRD TALK/NINA AND THE BABY SPARROWS

1. Why was there great joy in Nina's house? (2 Marks)

2. What did mother suggest to Nina? (2 Marks)

3. What are the 3 things that people can't do, but birds can do? (2 Marks)

4. Which is our national bird? (2 Marks)

5. Write the plurals of:- (3 Marks)

a) feather _____ b) sparrow _____ c) window _____

6. Use a suitable describing word:- (3 Marks)

a) A _____ orange

b) A _____ boy

c) A _____ house

7. Write the sounds of:- (3 Marks)

a) Dog _____ b) cat _____ c) birds _____

8. Fill in the blanks:- (2 Marks)

a) People eat with hands but birds eat with _____

b) People live in houses, but birds live in _____

9. Name the birds which make the following sounds:- (2 Marks)

a) caw caw _____ b) quack quack _____

10. Write the full forms of:- (3 Marks)

a) Don't _____ b) can't _____ c) they're _____

11. Rearrange the following words correctly:- (3 Marks)

a) clever/Vivek/a/boy/is

b) I can/tree/a/climb

c) Meena/new dress/a/bought

12. Choose the right word:- (3 Marks)

a) The birds have _____ wings (two/too)

b) The birds can _____ (sky/fly)

c) Birds drink _____ (grain/water)

13. Rearrange the jumbled letters correctly:- (2 Marks)

a) Yad _____ b) tae _____

14. Use can or cannot:- (2 Marks)

a) A monkey _____ climb a tree.

b) A man _____ drink 50 litres of water at a time.

15. Give one word for:- (2 Marks)

a) A place where birds live _____

b) A marriage ceremony _____

16. Complete the following sentences:- (4 Marks)

a) I have a pet. He is a _____. His name is _____

b) His colour is _____. He likes to eat _____

Class: III

Sub : ENGLISH

Unit 3 : LITTLE BY LITTLE/THE ENORMOUS TURNIP

1. What things does a seed need to grow? (2 Marks)

2. What did the old man plant? (2 Marks)

3. Why was it difficult for the old man to pull up the Turnip? (2 Marks)

4. Who helped him to pull up the enormous turnip? (2 Marks)

5. Write the opposites of:- (3 Marks)

a) Mighty x _____ b) slender x _____ c) downward x _____

6. Write any three parts of a plant:- (3 Marks)

7. Add "ly" to the words given in the bracket and complete the sentence:-

(3 Marks)

a) Amit was walking _____ (slow)

b) Please do your work _____ (neat)

c) Eat your food _____ (quiet)

8. Write the plurals of :- (3 Marks)

a) Grape _____ b) Potato _____ c) tomato _____

9. Tick the correct word:- (3 Marks)

a) Enormous -----Enormus-----

b) Tarnip-----Turnip -----

c) Woman _____ Wumen_____

10. Choose the correct word:- (3 Marks)

- a) A camel (drink/drinks) a lot of water.
- b) A monkey (has/have) a long tail.
- c) A horse (run/runs) fast.

11. Re-write using don't:- (3 Marks)

1. You can't go to that room

2. You can't wake up late _____

3. You can't eat junk food

12. Name 3 vegetables that grow under the ground:- (3 Marks)

13. Write the rhyming word for:- (2 Marks)

a) root _____ b) wide _____

14. Do you need the help of others in doing the following activities? (2 Marks)

a) Eating food(_____) b) Doing homework(_____)

15. Write the past tense of :- (2 Marks)

a) Pull _____ b) help _____

16. Fill in the blanks with vowels (a,e,i,o,u):- (2 Marks)

a) R_____dd_____sh

b) C_____rr_____t

Class: III
Sub : ENGLISH
Unit 4 : SEA SONG/A LITTLE FISH STORY

1. Write a few sentences about your pet. (2 Marks)

2. Why was the little fish unhappy? (1 Mark)

3. How many fishes are there in the sea? (1 Mark)

4. What did the child do with the shell? (2 Marks)

1. Pick-up words from the lesson to match these descriptions: - (4 Marks)

- a) A place where birds live _____
b) Another word for marriage _____
c) Birds are covered with these _____
d) A Place where there are many shops _____

2. Write the plurals of:- (4 Marks)

- a) House _____ b) dress _____
c) child _____ d) sparrow _____

3. Write the rhyming words for:- (4 Marks)

- a) Cold _____ b) Hand _____
c) shook _____ d) sound _____

4. Fill-up with the suitable group-words:- (4 Marks)

- a) A _____ of bees b) a _____ of sticks
c) a _____ of shoes d) a _____ of flowers

5. Match the sound:- (4 Marks)

- a) donkey chirp
- b) horse buzz
- c) bee bray
- d) bird neigh

6. Choose suitable describing words (4 Marks)

- a) A _____ lady (beautiful/child)
- b) A _____ mango (ripe/heavy)
- c) A _____ box (heavy/fast)
- d) A _____ man (tall/long)

1. Write any two dresses you like to wear (1 Mark)

2. Write the young one of:- (4 Marks)

- a) bear _____ b) hen _____ c) cat _____ d) dog _____

3. Encircle the odd one:- (1 Mark)

- a) Cat cow insect dog pig
- b) Lake sea ocean volcano river

4. Make sentences to show the difference:- (4 Marks)

- a) See

- b) Sea

- c) Sun

- d) Son

Class: III

Sub : ENGLISH

Unit 5 : THE BALLOON MAN/THE YELLOW BUTTERFLY

1. Draw a plant and label its parts: - (2 Marks)

2. Write the importance of trees in five lines (2 Marks)

3. Punctuate (2 Marks)

a) he is going to mr. lal's house _____

b) rahul and nupur live in mumbai _____

4. Complete the sentences using the present tense of the underlined words:-

(2 Marks)

a) Ajay brought samosa. He did not _____ wafers.

b) They sat on the sofa. They did not _____ in the chair.

5. Make correct pairs of the following words {butter, hot, bread, cold, hungry, sour, thirsty, sweet} (3Marks)

a) _____ and _____

b) _____ and _____

c) _____ and _____

6. Write the past tense of:- (4 Marks)

a) catch _____

b) fly _____

c) grow _____

d) chase _____

7. Match the following:- (4 Marks)

- a) Spider Den
- b) Lion Web
- c) Snake Stable
- d) Horse Hole

8. Join two words into one:- (4 Marks)

- a) Pine+apple = _____
- b) Some+thing= _____
- c) out+side= _____
- d) news+paper= _____

9. Write rhyming words for:- (4 Marks)

- a) Right _____
- b) sail _____
- c) will _____
- d)man _____

10. Re-write the names of colours:- (4 Marks)

- a) iovelt _____
- b) ikpn _____
- c) wyolle _____
- d) neger _____

11. Write fly or don't fly (2 Marks)

- a) squirrel ()
- b) butterfly ()

12. Write the meaning of (2 Marks)

- a) little by little = _____
- b) far and wide _____

13. Make sentence:- (4 Marks)

- a) strong _____
- b)slender _____

Class: III
 Sub : ENGLISH
 Unit 6 : STORY OF ROADS

1. Name the road signs given below : (5 Marks)

Make use of the help-box

u-turn, no-parking, zebra-crossing, traffic-light
 speed-breaker

2. Write a few relatives in your home. The hints are given for each : (5 Marks)

1. s i _ _ _ r 2. c o _ _ _ n 3. n e _ _ _ w
 4. u n _ _ _ 5. a _ _ _

3. Solve the puzzle about the people who help us. (7 Marks)

<p style="text-align: center;">Down</p> <ol style="list-style-type: none"> 1. He looks after our teeth. 2. She looks after the passengers on an aeroplane 3. He repairs water pipes and taps 4. He plans the design of our home <p style="text-align: center;">Across</p> <ol style="list-style-type: none"> 5. She looks after the patients 6. He repairs electrical equipments 7. Carries our luggage 	
--	--

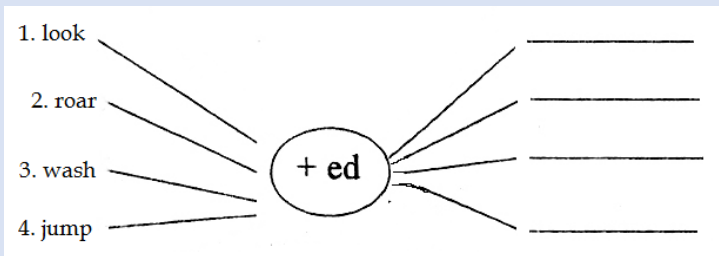
3. Write the plural of : (3 Marks)

- 1. carrot _____
- 2. story _____
- 3. mango _____


4. Match the sounds with sound makers : (6 Marks)

- | | |
|------------------|-------------------------|
| 1. sparrows | chatter-chatter |
| 2. crow | tring-a-ling |
| 3. children | chirrup-chirrup |
| 4. shoes | peas, cabbage |
| 5. bicycle | tramp-tramp |
| 6. vegetable-man | caw-caw |

5. Add -ed and turn them into past tenses : (4 Marks)



6. Look at the picture and write five sentences on 'My School Bus'. Use the given words (5 Marks)




7. Answer the following (5 Marks)

1 What sounds do you hear in the morning?

2 How is the road early in the morning?


3. What is the vegetable man selling?

4. Why is the road annoyed with the crow?



Class: III
Sub : ENGLISH
Unit 6 :Trains (Poem)

1. Complete the word train by starting the next word with the last letter of the previous word. (4 Marks)



2. Encircle the correct spelling: (5 Marks)

- | | | |
|-------------|----------|----------|
| 1. presious | pretious | precious |
| 2. mounten | mountain | mountan |
| 3. carring | carrying | carying |
| 4. freight | fraight | frighet |
| 5. rivar | river | rivur |

3. Find the answers hidden in the jumbled up words : (4 Marks)

- The train that is called as the lifeline of Delhi -
o m e t r - _____
- Name the place where the trains stop and go -
ywarali tionsta - _____
- Trains are a means of -
ptorranst - _____
- The fastest train of our country -
b s h a a t d i - _____

4. Match the following : (5 Marks)

- | 'A' | 'B' |
|-------------|-------------------------------|
| 1. mountain | a raised area of land |
| 2. plain | a small area of still water |
| 3. hill | a large area of flowing water |
| 4. river | very big hills |
| 5. pond | flat and even land |

5. Underline the correct word from those given bracket to make the sentence meaningful. (4 Marks)

- The cat jumped [in, over, at] the wall and ran away.
- The bus stopped [under, over, in front of] us.
- Little Rupa is hiding [behind, by, in front of] her mother.
- Wait [in, on, at] the gate of the school till I come.

6. Write some words that rhyme with these words : (2 Marks)

- 1. mail _____
- 2. plain _____

7. Can you recollect the people you saw at the railway station when you last visited it ? Mention them here. One has been done for you. (4 Marks)

- 1. p _ _ t _ r s
- 2. h _ _ k _ _ s
- 3. b _ _ k s _ _ _ _ s
- 4. f _ _ _ t s _ _ _ _ s

8. Give two examples of the following means of transport : (3 Marks)

Land	Water	Air
_____	_____	_____
_____	_____	_____


9. Answer the following (4 Marks)

1. Where do the trains run?

2. What does the train carry?

10. Describe the picture using the clues : [write five sentences] : (5 Marks)

platform, porter, luggage, coach, people,
families, ticket, checker, loud speaker



Class: III
Sub : ENGLISH
Unit 7 : Little Tiger Big Tiger

SECTION A

Encircle young ones of animals :

a	s	d	f	h	j	k	l	p	o	k	n
f	c	u	b	p	n	h	p	h	k	i	o
k	r	o	a	k	c	b	i	h	o	t	o
i	i	z	y	t	n	m	g	w	y	t	t
d	g	a	c	f	k	k	l	r	l	e	p
k	f	c	a	l	f	y	e	q	p	n	z
m	o	d	w	s	g	s	t	o	q	o	l
l	n	r	k	z	w	r	m	d	n	r	a
c	o	l	t	o	p	u	p	p	y	t	m
p	y	t	s	q	z	o	c	b	k	y	b
m	k	n	r	q	t	y	z	o	p	n	x
a	d	u	c	k	l	i	n	g	t	x	f

Circle the right spelling :

bellowed belloed bellowed

twitched twiched tweeched


paaunsed paused pounced

glistened gleesened glissened

SECTION B

Name the animal :



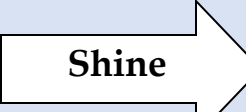

1. India's national animal _____
2. India's national bird _____
3. I bark _____
4. I neigh _____
5. I am the ship of the desert _____
6. I have a long trunk _____



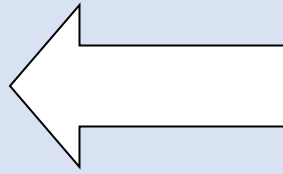
Match the right answer :

- | | | |
|---------|-------------------|-----|
| success | opposite of above | [] |
| below | double letters | [] |
| see | rhymes with still | [] |
| skill | phononym of sea | [] |

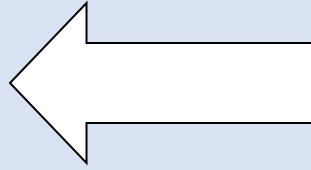
Match the 'past tense' of the given verbs :

1.  
2.  

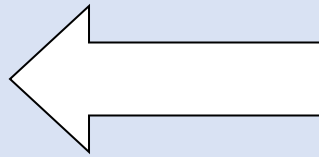
3. Understand



4. Feel



5. Carry



SECTION C

Write about this picture



Write the opposites of the given words :

1. down × _____
2. thin × _____
3. fast × _____
4. go × _____
5. low × _____

Read the passage and answer the questions :

Humming birds are tiny birds that can fly forward and backward. They are called humming birds because when they fly, their wings often make a humming sound. Their tiny wings beat about 55 to 75 times each second. The biggest hummingbird is the Giant Hummingbird. The smallest hummingbird is the Bee Hummingbird, which is about the size of a bee. They live for 3-4 years.

1. Name the bird in the passage.

2. Why are hummingbirds called so ?

3. Which is the biggest hummingbird ?

III. State 'True' or 'False' :

1. Hummingbirds are very small birds _____
2. The hummingbirds cannot fly _____

Class: III
Sub : ENGLISH
Unit 7 : Puppy And I

1. Name any five things that you happened to see on the way to school. (4 Marks)

2. Name any 5 vegetables and fruits your mother buys for the family. (5 Marks)

Vegetables

Fruits

_____	_____
_____	_____
_____	_____
_____	_____

3. Make questions using can : (2 Marks)

1. I can drive a car

Ans. _____

2. I hear the sound of feet

Ans. _____

4 Complete the sentences : (5 Marks)

- | | |
|--------------------------------------|-------------------|
| 1. Give me some _____ to eat. | [food/clothes] |
| 2. I want to _____ across the river. | [swim/walk] |
| 3. The Aeroplane flies in the _____ | [sky/road] |
| 4. Cauliflower is a _____ | [fruit/vegetable] |
| 5. The birds _____ | [mew/chirrup] |

5. Join and make phrases of the following : (5 Marks)

- | | |
|-----------------|---------|
| 1. a cluster of | bees |
| 2. a crew of | robbers |
| 3. a gang of | stars |
| 4. a shower of | trees |
| 5. a swarm of | rain |



6. Write about your 'pet dog'. (5 Marks)

7. Join the two words to make a new word : (5 Marks)

1. break + fast _____
2. news + paper _____
3. pine + apple _____
4. out + side _____
5. some + thing _____

8. Answer the following (5 Marks)

1. Who is the I in the poem?

2. Where is the man going?

3. Where is the horse going?

4. Who is the poet of the poem?

5. Why did the child go with the puppy?

9. Join the give words using "And": (4 Marks)

Sweet, butter, cold, thick, hot, bread, thirsty, hungry, thin, sour
Example : Eat and drink

1. _____ and _____
2. _____ and _____
3. _____ and _____
4. _____ and _____
5. _____ and _____

Class: III
Sub : ENGLISH
Unit 8 : My Silly Sister

1. Match the words with their opposites : (6 Marks)

silly	dull
difference	close
bright	intelligent
real	sorrow
open	similarity
joy	artificial

2. Correct the spellings of these words : (4 Marks)

1. chidish _____
2. angar _____
3. pleyful _____
4. washarman _____

3. Add 'ful' to make a word. (4 Marks)

- a. The children are _____. (play)
- b. The flowers are _____. (beauty)
- c. The books are _____. (use)
- d. The vegetables are _____. (plenty)

4. Add -ish to the following and make new words. (6 Marks)

- | | |
|------------------|------------------|
| 1. self - _____ | 4. style - _____ |
| 2. grey - _____ | 5. black - _____ |
| 3. devil - _____ | 6. boy - _____ |

5. Answer the following in one word using -ly words. (5 Marks)

1. The boy ran quickly. How did the boy run ?
Ans. _____
2. The girl talked loudly. How did the girl talk ?
Ans. _____
3. The wind blew softly. How did the wind blow ?
Ans. _____
4. He easily lifted the ball. How did he lift the ball ?
Ans. _____
5. The stars twinkled brightly. How did the star twinkle ?
Ans. _____

6. Find the 7 words ending with _ful hidden in the maze and write them in

the given space : (7 Marks)

A	O	Q	M	H	F	L	U	C	O	L	O	U	R	F	U	L
H	A	R	M	F	U	L	B	Q	N	G	V	A	P	Z	D	D
Q	D	E	R	N	H	K	L	D	G	E	Q	W	R	T	T	Y
V	G	W	O	N	D	E	R	F	U	L	S	R	J	P	E	J
Z	H	Z	X	U	B	H	B	S	G	F	T	S	T	A	B	O
Q	W	E	M	H	J	E	J	B	E	A	U	T	I	F	U	Y
R	J	K	N	V	G	L	U	P	B	L	F	J	K	O	L	F
Y	V	T	T	T	L	P	V	P	B	S	T	W	A	N	G	U
X	D	F	H	K	U	F	Y	C	H	E	E	R	F	U	L	L
C	C	Z	U	V	F	U	E	L	E	S	S	K	L	O	P	Y
X	S	D	C	U	O	L	R	M	E	C	L	E	A	R	L	Z
F	D	E	C	Q	X	C	A	R	E	F	U	L	X	C	E	X

- _____
- _____
- _____
- _____
- _____
- _____
- _____
- _____

7. Write two rhyming words for the following : (2 Marks)

- grown _____, _____
- chance _____, _____

8. Write two things you would like to do when you grow up. (2 Marks)

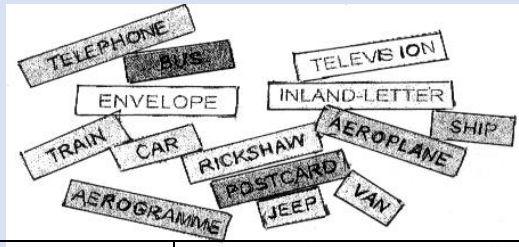
9. Write some lines on how you will help at home. (4 Marks)

Class: III
 Sub : ENGLISH
 Unit 8 : What's In The Mail Box?

1. Identify and name the following : (3 Marks)



2. Separate the cards used for communication and transport, write them in the respective columns : (7 Marks)



Transport	Communication

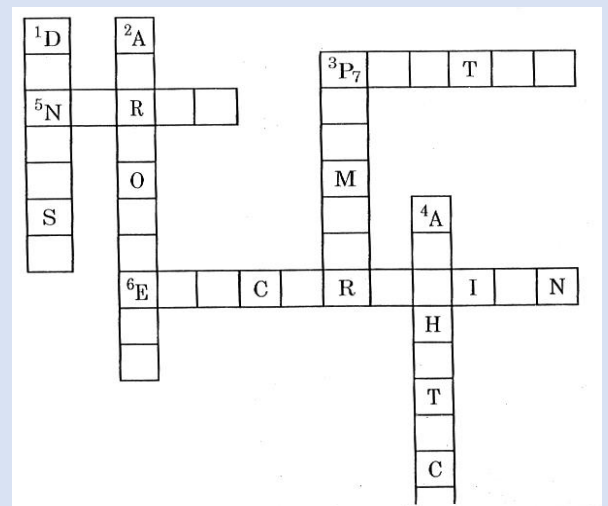
3. Solve the puzzle about the people who help us. (7 Marks)

Down

1. He looks after our teeth.
2. She looks after passengers on an aeroplane.
3. He repairs water pipes and taps.
4. He plans the design of our houses.

Across

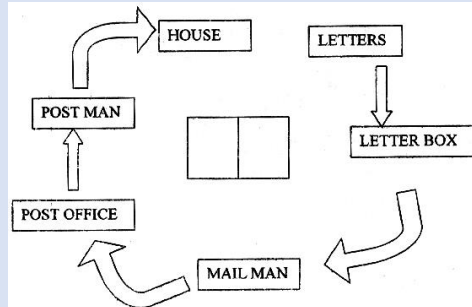
5. She looks after the patients.
6. He repairs electrical equipments.
7. Carries our luggage



4. Make two words each from the given words : (6 Marks)

- 1. Friend _____
- 2. Beautifu _____
- 3. Carpenter _____

5. Write the journey of a letter: (6 marks)



6. Answer the following (6 marks)

Q1. Who brings letters for us?

Q2 Why do we write letters?

Q3. Who is the speaker in the poem?

7. Complete the sentences using the correct word: (5 Marks)

- 1. The weather _____ beautiful today.
- 2. All the children _____ in the playground.
- 3. Nobody in my class _____ interested in football.
- 4. Sally _____ my best friend.
- 5. Mum and dad _____ downstairs watching television.



1. List 3 actions which the students should do and which they should not do in the school: (6 Marks)

--	--

2. It is rhyme time now. Copy a suitable word on the blank from the cloud. (4 Marks)



<table style="border-collapse: collapse; margin: auto;"> <tr><td style="border: 1px solid black; padding: 2px;">WELL</td></tr> <tr><td style="border: 1px solid black; padding: 2px;">_____</td></tr> <tr><td style="border: 1px solid black; padding: 2px;">SWELL</td></tr> </table>	WELL	_____	SWELL	<table style="border-collapse: collapse; margin: auto;"> <tr><td style="border: 1px solid black; padding: 2px;">TIDE</td></tr> <tr><td style="border: 1px solid black; padding: 2px;">_____</td></tr> <tr><td style="border: 1px solid black; padding: 2px;">SLIDE</td></tr> </table>	TIDE	_____	SLIDE	<table style="border-collapse: collapse; margin: auto;"> <tr><td style="border: 1px solid black; padding: 2px;">MAY</td></tr> <tr><td style="border: 1px solid black; padding: 2px;">_____</td></tr> <tr><td style="border: 1px solid black; padding: 2px;">WAY</td></tr> </table>	MAY	_____	WAY	<table style="border-collapse: collapse; margin: auto;"> <tr><td style="border: 1px solid black; padding: 2px;">GET</td></tr> <tr><td style="border: 1px solid black; padding: 2px;">_____</td></tr> <tr><td style="border: 1px solid black; padding: 2px;">SET</td></tr> </table>	GET	_____	SET
WELL															

SWELL															
TIDE															

SLIDE															
MAY															

WAY															
GET															

SET															
<table style="border-collapse: collapse; margin: auto;"> <tr><td style="border: 1px solid black; padding: 2px;">BELL</td><td style="border: 1px solid black; padding: 2px;">HELL</td></tr> </table>	BELL	HELL	<table style="border-collapse: collapse; margin: auto;"> <tr><td style="border: 1px solid black; padding: 2px;">WIDE</td><td style="border: 1px solid black; padding: 2px;">RIDE</td></tr> </table>	WIDE	RIDE	<table style="border-collapse: collapse; margin: auto;"> <tr><td style="border: 1px solid black; padding: 2px;">HAY</td><td style="border: 1px solid black; padding: 2px;">SAY</td></tr> </table>	HAY	SAY	<table style="border-collapse: collapse; margin: auto;"> <tr><td style="border: 1px solid black; padding: 2px;">LET</td><td style="border: 1px solid black; padding: 2px;">WET</td></tr> </table>	LET	WET				
BELL	HELL														
WIDE	RIDE														
HAY	SAY														
LET	WET														

3. Write the full forms of: (6 Marks)

- | | |
|----------------|-----------------|
| 1. don't _____ | 4. can't _____ |
| 2. I'm _____ | 5. It's _____ |
| 3. I'll _____ | 6. that's _____ |

4. Write two sentences using the following (4 Marks)

patiently _____

tried _____

5. Make new words using the letters from the given words: (6 Marks)

wholesome	_____ / _____ / _____	_____ / _____ / _____
ancestors	_____ / _____ / _____	_____ / _____ / _____
vegetables	_____ / _____ / _____	_____ / _____ / _____
checklist	_____ / _____ / _____	_____ / _____ / _____
course book	_____ / _____ / _____	_____ / _____ / _____

6. Give the degree of comparison for these. (6 Marks)

big		
young		
large		
fine		
wise		

7. Nina and Radha are talking about their school. Imagine what they are talking: (5 Marks)

Nina : _____

Radha : _____

Nina : _____

Radha : _____

Radha : _____

8. Put the punctuation marks at appropriate places : (5 Marks)

1. sun gives us light and energy

2. oh what a beautiful flower

3. are you going to school

4. pakistan nepal srilanka myanmar, afghanistan, bhutan and China are our neighbouring countries.

5. pune is a crowded city

9. Answer the following (4 Marks)

Q.1 Who has written the poem "Don't Tell?"

Q2. Who is the speaker in the poem?

1. Complete this family tree with the names of your relatives (6 Marks)



2. Choose the correct answer (4 Marks)

1. What went up the hill?

(a) a path, (b) a street, (c) a road, (d) a rail line

2. What is the name of the girl in the story?

(a) Seema, (b) Beena, (c) Meena, (d) Nina

3. How old was Meena?

(a) Ten, (b) Twelve, (c) Nine, (d) Eight

4. How old was Meena's brother?

(a) Five, (b) Four, (c) Six, (d) Seven

3. Here are a few signs for children who cannot hear. Write the words from the clue-box for these signs : (6 Marks)

CLUE BOX

write, dance, lose, win, sing, read



1. _____



2. _____



3. _____



4. _____



5. _____



6. _____

4. Write the opposite Gender: (4 Marks)

1. cock _____
2. aunt _____
3. nephew _____
4. master _____

5. Join the two words to make a new word: (5 Marks)

1. break + fast _____
2. news + paper _____
3. pine + apple _____
4. out + side _____
5. some + thing _____

6. Add vowels to the given letters and rewrite the names a, e, i, o, u (7 Marks)

- | | |
|------------------|--------------------|
| 1. b r d - _____ | 5. l m b - _____ |
| 2. l n - _____ | 6. l z r d - _____ |
| 3. b t - _____ | 7. h r s - _____ |
| 4. c t - _____ | 8. b l l - _____ |

7. Write a few sentences about the pictures given : (6 Marks)

1. Clues : clouds, umbrella, paper boats, friends, enjoy



2. Clues : grand parents, love and care, play, stories, gift



3. Clues : dining table, food, water, health, nutritious



8. Write the missing letters and complete the word : (2 Marks)

1. c o _ _ _ n

2. g r _ _ n d m o t _ _ e r

ZONAL INSTITUTE OF EDUCATION & TRAINING, CHANDIGARH


Class: III

Sub: ENGLISH

Unit 10: The Ship of The Desert

1. Complete these expressions: (5 Marks)

1. as fast as a _____
2. as proud as a _____
3. as busy as a _____
4. as tall as a _____
5. as soft as _____



3. Write the sentences keeping the code of numbers for the letters :

(6 Marks)

A	B	C	D	E	F	G	H	I	J	K	L	M
1	2	3	4	5	6	7	8	9	10	11	12	13

N	O	P	Q	R	S	T	U	V	W	X	Y	Z
14	15	16	17	18	19	20	21	22	23	24	25	26

a] the camel said,

9 1 13 20 8 5 19 8 9 16 15 6 20 8 5

--	--	--	--	--	--	--	--	--	--	--	--	--

4 5 19 5 18 20 "

--	--	--	--	--	--

b] The lion said,

9 1 13 20 8 5 11 9 14 7 15 6 20 8 5

--	--	--	--	--	--	--	--	--	--	--	--	--

6 15 18 5 19 20 "

--	--	--	--	--	--

4. Answer the following : (5 Marks)

1. People call me the ship of the desert. I live in desert. I store food in my hump. Who am I?

2. I am the national bird of India. I have long beautiful tail. My feathers are famous for its beautiful colours. Who am I?

3. I am the king of the forest. I eat only meat. I have padded paws. Who am I?

4. I am the national animal of India. I have yellow and black stripes on my body. I belong to cat's family. Who am I ?

5. I am the biggest animal on land. I have trunk and tusk. I like to eat leaves and fruits. Who am I ?

5. Fill with can/ cannot : (6 Marks)

1. I _____ climb the stairs.
2. I _____ sing a song.
3. I _____ drive a car.
4. I _____ earn money now.
5. I _____ read a story book.
6. I _____ cook like my mother.

6. Look at the picture and write a few lines on what these animals will speak to each other. (12 Marks)







7. Missing vowels. (6 Marks)

The following occupations have had their vowels removed. Write the words correctly.

1. chmst _____
2. bldr _____
3. tchr _____
4. frmr _____
5. plmbr _____
6. crpntr _____

ZONAL INSTITUTE OF EDUCATION & TRAINING, CHANDIGARH

Class: III


Sub: ENGLISH

Unit 10: How Creatures Move?

1. Find the movement / action words from the word - maze. Circle them. (5 Marks)

W	I	G	G	L	I	N	G	B	S
R	S	Y	G	E	B	C	Q	S	W
I	P	H	M	A	R	R	L	I	I
G	R	O	O	P	E	A	C	N	N
G	E	P	T	I	A	W	D	G	G
L	A	P	Y	N	D	L	N	R	I
I	D	I	J	G	I	E	D	Y	N
N	R	N	D	A	N	C	I	N	G
G	F	G	E	R	G	Z	V	W	Q
W	D	T	F	L	Y	Q	E	C	P

2. List the hobbies you perform during your free time ? Write them down (5 Marks) in the boxes.



3. Find all the words for the given clues from the letters : A R I T H M E T I C (8 Marks)

1. a female horse _____
2. the clock shows this _____
3. you sit on it _____
4. not wild _____
5. a group of players _____
6. the organ that pumps blood _____
7. the fat of milk _____
8. drop of liquid from eye _____

4. Make meaningful word by adding 'e' at the appropriate places. Clues are given in the bracket. The first one is done for you. (7 Marks)

1. agl [bird] eagle
2. jwl [precious stone] _____
3. fnc [boundary] _____
4. gnral [army rank] _____
5. nmy [foe] _____
6. prfct [ideal] _____
7. coff [beverage] _____

5. Fill in the blanks with the correct word from the box : (5 Marks)

flying, running, hopping, swinging, walking

Some animals at the zoo have escaped from their cages and are causing a lot of trouble for the zoo-keepers. The parrots are _____ around in the trees and the monkeys are _____ from branch to branch. The horses are _____ Quickly around the zoo while the baby kangaroo is _____ away from a zoo-keeper who is trying to catch it. The slow old rabbit is _____ under a leafy tree to rest in the shade.

6. Choose the correct word from the box : (4 Marks)

(donkey, train, dog, cat)

1. whistling of a _____
2. mewling of a _____
3. braying of a _____
4. barking of a _____

7. Read the poem and answer the questions given : (6 Marks)

Tibloo is my friend
Tibloo has four legs
Tibloo has a long tail
Who is Tibloo ?

Tibloo barks
Tibloo wags his tail
Tibloo is happy
Who is Tibloo ?

Tibloo is my dog!

1. Use the word 'friend' in a sentence :

2. A cat mews, A dog _____
3. Write the opposite of -sad × _____
4. Write a rhyming word for -pail - _____
5. Fill in : A dog _____ his tail.
6. Name the dog in the poem _____

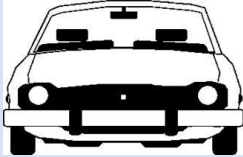
ZONAL INSTITUTE OF EDUCATION & TRAINING, CHANDIGARH

Class: III


Sub : Maths

Lesson 1 : Where to look from?

1) Underline the correct view of the following things: (2 marks)

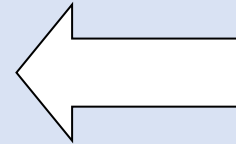

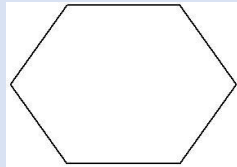
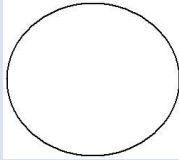


TOP / SIDE / FRONT

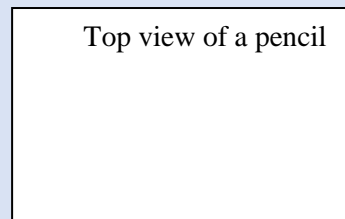
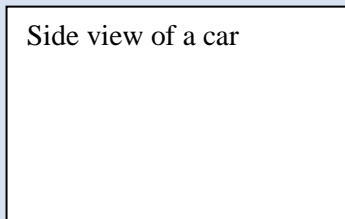


TOP / SIDE / FRONT

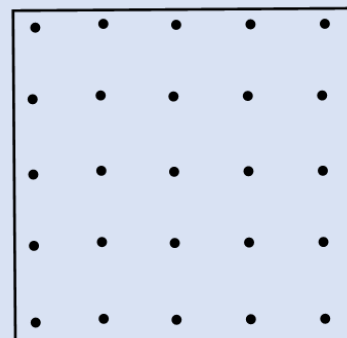
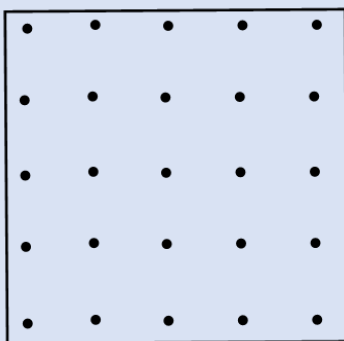
3) Draw dotted lines to show the similar mirror halves. (4 marks)



4) Draw the following (2 marks)



5) (a) Draw design using only straight lines (b) Draw design using only curved lines (6 marks)



6) Draw dotted lines to show the similar mirror halves. (3 marks)

A U W E B C


7) Which of the followings can be divided into similar mirror halves? (3 marks)

3 8 5 2 0 I

8) Complete the following. (8 marks)



9) Show similar mirror halves. Colour each half in different colours. (5 marks)




10)

11 Draw and colour a rangoli design.

(3 marks)

Two alphabets which can be divide into similar halves (2 marks)

Two numbers which can be divide into similar halves(2 marks)



ZONAL INSTITUTE OF EDUCATION & TRAINING, CHANDIGARH

Class: III

Sub : Maths

Lesson 2: Fun with numbers

1) Write the number: (4 marks)

(a) Two hundred thirteen _____ (b) Six hundred forty nine _____

(c) $600 + 50 + 8 =$ _____ (d) $400 + 10 + 3 =$ _____

2) Fill in the blanks: (2 marks)

275, _____, _____, 278, 279, _____, _____

812, 813, _____, _____, 816, _____, _____

3) Put $>$ $<$ sign (4 marks)

(a) 467 941 (b) 235 234 (c) 105 505 (d) 45 450

4) Write in words: (2 marks)

327 = _____

908 = _____

5) Write the expanded form: (4 marks)

(a) $538 =$ _____ + _____ + _____ (b) $692 =$ _____ + _____ + _____

(c) $310 =$ _____ + _____ + _____ (d) $502 =$ _____ + _____ + _____

6) Fill in the number: (4 marks)

(a) 202, 204, 206, _____, _____ (b) 620, 630, 640, _____, _____

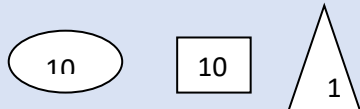
(c) 700, 750, 800, _____, _____ (d) 400, 500, 600, _____, _____

7) Write the numbers: (4 marks)

Century = _____ Triple century = _____

Smallest 2- digit number = _____ Largest 3- digit number = _____

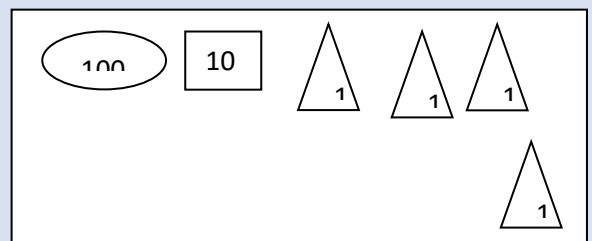
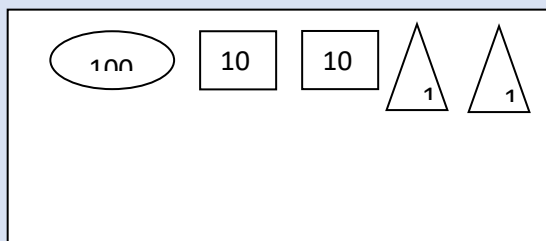
8) Write as (2 marks)

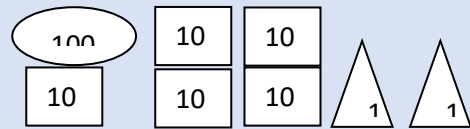
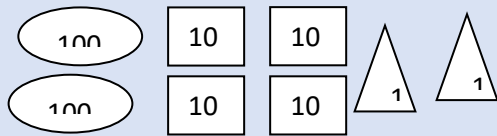


(a) 743 = _____

(b) 195 = _____


9)(a) How many are there? (2 marks)





(b) How much?

(2 marks)



_____ rupees

_____ rupees

10) Write odd numbers from 345 to 380.

(2 marks)

11) Who am I?

(4 marks)

(a) I have 8 Hundreds, 3 tens and 0 ones in me _____

(b) I come between 40 and 50 and there is a 5 in my name _____

(c) I am 4 more than a century _____

(d) I am the smallest 3 digit number ____

12)(a) 248 , 246 , 244 , _____ , _____ (b) 500 , 490 , 480 , _____ , _____

(2 marks)

13) Circle the largest number: 479 , 281 , 937 , 873 , 973 , 468

(1 mark)

14) Circle the smallest number: 867 , 392 , 819 , 293 , 918 , 360

(1 mark)

ZONAL INSTITUTE OF EDUCATION & TRAINING, CHANDIGARH

Class: III

Sub : Maths

Lesson 3 : Give and take

1) Fill in the blanks. (4 marks)

(a) $20 + 30 =$ _____

(b) $15 + 7 =$ _____

(c) $9 + 8 =$ _____

(d) 10 more than 62 = _____

2) Add (4 marks)

$\begin{array}{r} 815 \\ +133 \\ \hline \end{array}$	$\begin{array}{r} 406 \\ +283 \\ \hline \end{array}$	$\begin{array}{r} 312 \\ +53 \\ \hline \end{array}$	$\begin{array}{r} 723 \\ +165 \\ \hline \end{array}$
--	--	---	--

3) Add by breaking the numbers. (8 marks)




$\begin{aligned} (a) 36 + 52 &= \underline{\quad} + \underline{\quad} + \underline{\quad} + \underline{\quad} \\ &= \underline{\quad} + \underline{\quad} + \underline{\quad} + \underline{\quad} \\ &= \underline{\quad} + \underline{\quad} \\ &= \underline{\quad} \end{aligned}$	$\begin{aligned} (b) 36 + 52 &= \underline{\quad} + \underline{\quad} + \underline{\quad} + \underline{\quad} \\ &= \underline{\quad} + \underline{\quad} + \underline{\quad} + \underline{\quad} \\ &= \underline{\quad} + \underline{\quad} \\ &= \underline{\quad} \end{aligned}$
--	--

4) Add (i) $463 + 136$ (ii) $395 + 202$ (iii) $742 + 63$ (6 marks)



(iv) $543 + 95$



(v) $285 + 159$

(vi) $368 + 489$

5)  = 137  = 258  = 461 (8 marks)

(i)   + _____ = _____

(ii)  +  = _____

(iii)  +  = _____

(iv)  +  +  = _____

6) Work out four different ways to get the same number: (6 marks)

82
____ + ____
____ + ____
____ + ____
____ + ____

65
____ + ____
____ + ____
____ + ____
____ + ____

19
____ + ____
____ + ____
____ + ____
____ + ____

7) Which of the following sum is more than 650? (4 marks)

- (a) $168 + 243$ (b) $357 + 296$ (b) $485 + 125$ (d) $506 + 197$

ZONAL INSTITUTE OF EDUCATION & TRAINING, CHANDIGARH

Class: III

Sub : Maths

Lesson 4 : Long and short

1) Write (3 marks)

(a) 1 m = _____ cm (b) 4 m = _____ cm (c) 8 m = _____ cm

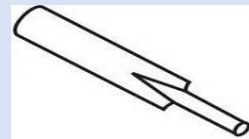

2) Write m , cm or km. (3 marks)

- (a) My finger is 7 _____ long.
(b) My house is 4 _____ away from the school.
(c) My classroom is 7 _____ long.

3) Which is longer? Circle them. (4 marks)

- (a) An earthworm / A saree (b) A nail / A tooth brush
(c) A pen / A safety pin (d) An eraser / A scale

4) Measure the length of the following objects (8 marks)



5) Tick the correct answer. (6 marks)

Object	More than 1 metre	Less than 1 metre
A saree		
A pencil		
A pagadi		
Depth of a well		
A banana		
Height of your father		

6) Draw the following. (6 marks)

A leaf of 5 cm

A spoon of 7 cm

Two vertical lines are drawn on the page, one on the left and one on the right, intended for drawing the objects described above.

7) Match the following.

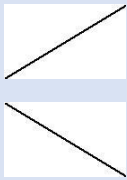
(6 marks)

- | | |
|---|-----------|
| (i) Distance from Chandigarh to Delhi _____ | a) 4 cm |
| (ii) Height of a door _____ | b) 20 m |
| (iii) Length of an ant _____ | c) 2 m |
| (iv) Length of a match stick _____ | d) 250 km |
| (v) Length of a skipping rope _____ | e) 2 cm |
| (vi) Distance from school gate to classroom _____ | f) 3 m |

8) Estimate the lengths of the following objects and tick the right answer

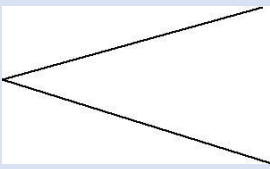
(4 marks)

1) Length of a blackboard



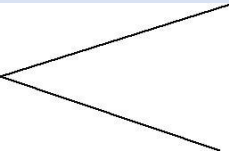
Less than 1 m
More than 1 m

2) Length of a cot



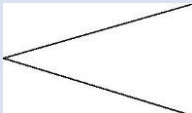
Less than 1 m
More than 1 m

3) Length of a pillow



Less than 1 m
More than 1 m

4) Length of a door



Less than 1 m
More than 1 m




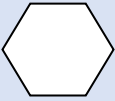
ZONAL INSTITUTE OF EDUCATION & TRAINING, CHANDIGARH

Class: III

Sub : Maths


5. SHAPES AND DESIGNS

1) Count the number of Edges and Corners in these figures. (Marks 8)

SHAPES				
EDGES				
CORNERS				

2) Colour the scarecrow as directed: red \triangle blue \square yellow \circ blue \square

(Marks 8)



NO: OF \triangle = _____

NO: OF \square = _____

NO: OF \circ = _____

NO: OF \square = _____

3) Write the number of edges and corners of the following objects (Marks 8)

Name of Thing	Number of edges	Number of Corners
Egg	_____	_____
Dice	_____	_____
Sheet of Paper	_____	_____
Ball	_____	_____

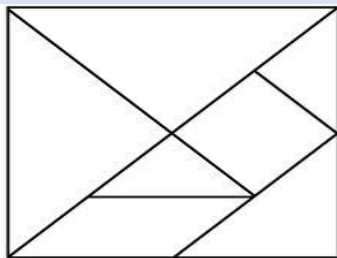
4) How many straight edges and curved edges are there in the following diagram. (8 Marks)



Straight Edges _____

Curved Edges _____

5) Observe the following diagram and answer the question a and b. (4 Marks)




a) How many triangles are there in the diagram?

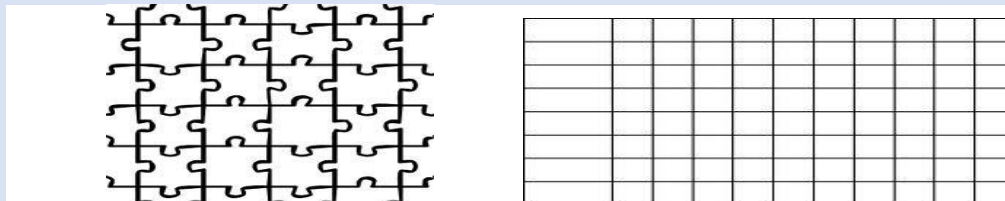
Ans: _____

b) Colour the triangles which are exactly same

6. Draw a rectangle, square and triangle in the following grid. (2 Marks)



7. Using colour pencils make your own pattern of shapes. (2 Marks)



ZONAL INSTITUTE OF EDUCATION & TRAINING, CHANDIGARH

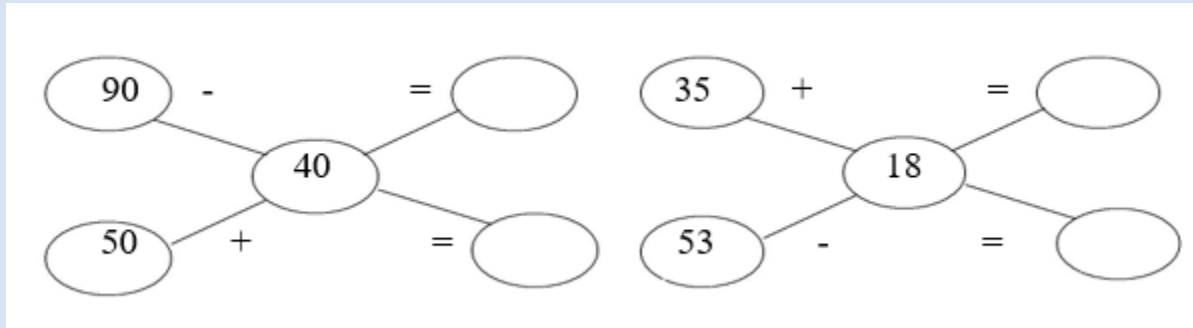
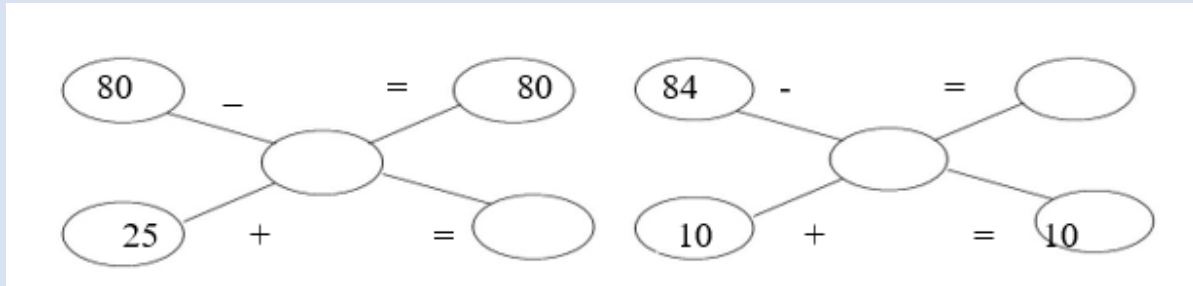
Class: III

Sub : Maths

6. Fun with Give and Take

1. Answer the following mentally

(8 Marks)



2. Solve the following

(10 Marks)

700	923	739	429	709
- 323	- 609	-299	- 329	- 343
_____	_____	_____	_____	_____
_____	_____	_____	_____	_____

141	280	700	350	467
+260	+699	+140	+439	+243
_____	_____	_____	_____	_____
_____	_____	_____	_____	_____

3.SOLVE**(8 Marks)**

a) Baby elephant is 5 years old. Mother elephant is 20 years old. What is the total age of mother elephant and baby elephant?

b) There are 9 lions in the first row and 9 lions in the second row. How many total lions are there altogether?

c) There were 30 parrots on the tree. After some time 15 parrots flew away. How many parrots are left on the tree?

d) Avinash cooked noodles in 5 minutes. Then he cooked pulao in 30 minutes. How much time did he take to cook both the dishes?

4) Find the missing numbers**(6 Marks)**

a) 120, 140, 160, _____, _____, _____

b) 45, 55, 65, _____, _____, _____

c) 90, 80, 70, _____, _____, _____

d) 28, 38, 48, _____, _____, _____

e) 2, 4, 6, 8, _____, _____, _____

f) 1, 3, 5, 7, _____, _____, _____

5) Check the subtraction answer using addition**(8 Marks)**

a)
$$\begin{array}{r} 683 \\ - 532 \\ \hline \end{array}$$

check

b)
$$\begin{array}{r} 900 \\ - 257 \\ \hline \end{array}$$

check

c)
$$\begin{array}{r} 864 \\ - 600 \\ \hline \end{array}$$

check

d)
$$\begin{array}{r} 754 \\ - 462 \\ \hline \end{array}$$

check

ZONAL INSTITUTE OF EDUCATION & TRAINING, CHANDIGARH

Class: III

Sub : Maths

7. Time goes on

PART A

Q1.FILL UP:{8} a) Colour all the Sundays in red

b) On Which day does the month end._____

FEBRUARY 2011						
SUN	MON	TUES	WED	THURS	FRI	SAT
		1	2	3	4	5
6	7	8	9	10	11	12
13	14	15	16	17	18	19
20	21	22	23	24	25	26
27	28					

c)Write the name of the month and year from the calender._____ d)Write number of days in this month._____

e) What is the date on second saturday._____

f)What day is on 16?_____

g) What day is on 23 of this month?_____ h)Colour all Saturdays in yellow

PART B Q2. How long does it take? Use the words given below: {10}

Seconds	minutes	hours	days	months
---------	---------	-------	------	--------


- a. To drink a glass of water _____
- b. To brush your teeth _____
- c. For the sun to rise _____
- d. To blink your eyes _____
- e. To switch on the light _____
- f. For a plant to grow _____
- g. To do your homework _____
- h. To eat your dinner _____

i. To have a bath


j. To pack your school bag


Q3. Given below are some festivals we celebrate during the year. Look at the calendar (2006) to find the days on which these fall. {8}


Name of the festival	Date	Day
Diwali	October 21	
Pongal	January 14	
Raksha Bandhan	August 9	
Gandhi Jayanti	October 2	
Milad-UI-Nabi	April 11	
Onam	September 5	
Christmas Day	December 25	
Bihu	April 14	




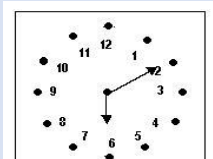
Q4. Write the time {6}

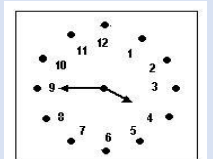












PART C

Q5. Draw the clocks and show the following time: {4}



Q6. What will the time be?{4}

a. 1 hour after 10:30

b. 15 minute after 3:30

c. 10 minutes before 1:20

d. 20 minutes before 5:00

ZONAL INSTITUTE OF EDUCATION & TRAINING, CHANDIGARH

Class: III

Sub: MATHS

Lesson 8- Who is heavier?

1. What will you use g or kg to measure the weight of the following: (8 Marks)

- 1. A pencil _____
- 2. A big watermelon _____
- 3. A cake _____
- 4. An orange _____
- 5. A sack of wheat _____
- 6. A spoon of sugar _____
- 7. An apple _____
- 8. A big pumpkin _____

2. Guess their weights and match (5 Marks)



Rice for 1 month

50 Kg

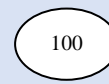
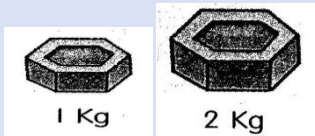
10 Kg

more than 100Kg

2Kg

100 gm

3. Draw the weights that you will use to weigh the items given in the table: (8 Marks)



ITEMS	WEIGHT USED
5 Kg sugar	
1 Kg 500 g tomatoes	

4. Do as directed and complete the table: (10 Marks)

Weights	Double	Half
200 g		
1 kg		
6 kg		
450 g		
20 kg		

5. Encircle the heavier objects (5 Marks)

- a) 20g 50g b) 5kg 8kg c) 250g 175g
- d) 50kg 276kg e) 100kg 100g

6. Convert into grams: (2 Marks)

6 kg = 4 kg =

7. WORD PROBLEMS (4 Marks)

a) Mrs Sheela's baby weight is 25 kg 500 gm. Mrs Malini's baby weight 23 kg 770 gm. What is the total weight of both the babies?

b) Balu brought 15 kg of potatoes. He sold 13 kg of tomatoes. Find the total weight of Potatoes and tomatoes?

8. Make a list of any things which weigh (2 Marks)

Less than 1 Kg _____

More than 1 Kg _____

ZONAL INSTITUTE OF EDUCATION & TRAINING, CHANDIGARH

Class: III

Sub: MATHS

Lesson 9- HOW MANY TIMES?


1. Complete the table: (6 Marks)

Sl. No	Repeated Addition	In words	Multiplication
1	2+2+2	3 groups of 2 are 6	3X2 =6
2	7+7+7+7	4 groups of __are__	___x___ = ___
3	8+8+8		
4	10+10		

2. Encircle the multiples of 5: (2 Marks)

1, 2, 5, 6, 10, 12, 15, 17, 20, 24, 25, 30, 35, 40

3. FIND THE TOTAL WITHOUT COUNTING { 3 }



Rows = ___

Columns = ___

Total flowers=

___ X ___ = ___

4. Write (3 Marks)

6X9=___

4X8=___

2X7=___

5. Fill in the blanks: (12 Marks)

1. 21 x 100 = _____

7. _____ x 100 = 1700

2. 87 x 200 = _____

8. 9 x 300 = _____

3. 66 x 10 = _____

9. 10 x 900 = _____

4. 607 x _____ = 6070

10. 700 x 10 = _____

5. _____ x 100 = 5000

6. 10 x 85 = _____

11. 40 x 10 = _____

12. _____ x 10 = 1460

6. Write repeated addition as multiplication (6 Marks)

1 hand = 5 fingers

2 hands = _____ fingers

3 hands = _____ fingers

4 hands = _____ fingers

1 Student = 2 Eyes

3 Student = _____ Eyes

5 Student = _____ Eyes

7 Student = _____ Eyes

7. MULTIPLY (4 Marks)

a) 38 x 24

b) 45 x 25

8. WORD PROBLEMS (4 Marks)

a) One car has 4 wheels. How many wheels will 9 car have?

b) 68 students can sit in one bus. How many students will sit in 12 buses?

Class: III

Sub : Maths

Lesson 10 : Play With Patterns

1) Continue the pattern: (4 Marks)

i) 21A, 23B, 25C, _____, _____

ii) 13, 23, 33, 43, 53, _____, _____, _____, _____

iii) AA ,B , AA , B , _____, _____, _____, _____

iv) 1A ,3B , 5C , _____, _____, _____, _____

2) Encircle the multiples of 5: (2 Marks)

1, 2, 5, 6, 10, 12, 15, 17, 20, 24, 25, 30, 35, 40

3) If we add 1 to any odd number we get an _____ number.

(1 Mark)

4) Complete the pattern : (5Marks)

(a) 13, 23, 33, 43, 53, _____, _____

(b) 12 A, 13 B , 14 C, 15 D , _____, _____

(c)  _____, _____

(d) 110, 120, 130, 140, _____, _____

(e) 4 , 8 , 12, _____, _____, _____, _____

5) Circle all odd numbers. (2 Marks)

45, 76, 32, 89, 73, 90, 35, 100, 123, 156, 345, 4

6) Circle the even numbers (2 Marks)

62 74 45 14 97 30 81 40 77 87 90

7) Write the secret messages. (4 Marks)

a. 2H202W2 3A3R3E3 4Y404U4 : _____

b. 7B7E7S7T 808F8 9L9U9C9K9: _____

c. 1g 2o 3o 3d 4m 5o 5r 6n 7i 8n 9g : _____

d. I ALAOVAE AIANADAIAA: _____

8) Write all odd numbers between 10 and 40 (2 Marks)

Ans) _____

9) Write all even numbers from 1 to 100 which have 0 in ones place (2Marks)

Ans) _____

10) Arrange the names in alphabetical order. (8 Marks)

Raghu, Ethen, Meenakshi, Veena, Sonal, Balu, Ganesh,
Dalvi, Pritham, Zahid, Dhanesh, Janavi, Aryan, Soham, Nilay, Teena,

1) _____ 2) _____ 3) _____ 4) _____

5) _____ 6) _____ 7) _____ 8) _____

9) _____ 10) _____ 11) _____ 12) _____

13) _____ 14) _____ 15) _____ 16) _____

11) Write all even numbers between 80 to 100: (2 Marks)

12) Write one secret message using only numbers: (2 Marks)

13) Write one secret message using only alphabets: (2 Marks)

14) Write all multiples of 5 up to 50 which are odd. (2 Marks)

ZONAL INSTITUTE OF EDUCATION & TRAINING, CHANDIGARH

Class: III

Sub:MATHS

Lesson 11 : Jugs And Mugs

1) 1 litre = _____ millilitres (1 mark)

2) Write liters or milliliters : A bucket can hold 25 _____ of water. (1 mark)

3) Name two containers which can hold more than 1 litres of water (2 marks)

_____ , _____

4) Name two containers which can hold less than 1 litres of water (2 marks)

_____ , _____

5) Name two things which we measure in litres (2 marks)

_____ , _____

6) 4 litres = _____ millilitres, 10 litres = _____ millilitres

(2 marks)

7) Two animal which can drink more than 1 litre water at a time is (2 marks)

_____ , _____

8) Write two activities which need more than one litre of water. (2 marks)

_____ , _____

9) Write two activities which need less than one litre of water. (2 marks)

_____ , _____

10) Arrange the containers in the ascending order of their capacity in holding water:

cup, tank, bucket, spoon, mug (2 marks)

11) Arrange the containers in the descending order of their capacity in holding

water : jug, glass, drum, tank, tanker. (2 marks)

12) Write (4 marks)

a) 10 litres + 25 litres = _____ litres.

b) 400 litres + 30 litres = _____ litres.

c) 15 litres - 5 litres = _____ litres.

d) 50 litres - 30 litres = _____ litres.

13) Which of the following will you measure in litre and in millilitre (4 marks)

(a) A tank of water () (b) A spoon of syrup ()

(c) A glass of milk () (d) A can of cooking oil ()

14) Pot A holds 12 glasses of water and Pot B holds twice as much water as pot A. How many glasses of water are needed to fill pot B? (2 marks)

15) 35650 ml = _____ litres + _____ millilitres (2 marks)

16) 5355 ml = 5 _____ + 355 _____ (2 marks)

17) Jyoti has 6 litres of juice. How many bottles of 500 millilitres can she get? (2 marks)

18) Fill in the blanks: (4 Marks)

(i) 3500 ml = _____ litre _____ ml.

(ii) 2 l, 300 ml = _____ millilitre.

(iii) Unit of measurement of kerosene oil is _____

(iv) Syrup is measured in _____

ZONAL INSTITUTE OF EDUCATION & TRAINING, CHANDIGARH

Class: III

Sub: MATHS

Lesson 12 - Can We Share?

1. Write the answers. (5 Marks)

1) Division is repeated _____

2) $6 \times 8 =$ _____

3) _____ $\times 25 = 0$

4) $15 \times 0 =$ _____

5) $8 \times 3 =$ _____

2. Solve (10 Marks)

1) 7 times 4 is same as _____ \times _____

2) _____ times _____ is same as 9×7

3) 8 dozen bananas = _____ \times _____ = _____ bananas

4) $8 + 8 + 8 + 8 + 8 + 8 =$ _____ times _____

5) $10 \times 20 \times 6 =$ _____

3. Solve the sums division (6 Marks)

a) $45 \div 10 =$ _____ b) $395 \div 100 =$ _____ c) $0 \div 8 =$ _____

d) $25 \div 1 =$ _____ e) $35 \div 35 =$ _____ f) $45 \div \underline{\quad} = 45$

4. Divide and find the quotient and remainder (8 Marks)

a) $369 \div 3$	b) $280 \div 2$	c) $689 \div 2$	d) $456 \div 4$

--	--	--	--

5. Cost of 8 pencil is Rs 24. What is the cost of 1 pencil ? (2 Marks)

6. 100 players were divided equally into 10 teams. How many players are there in each team ? (2 Marks)

7. Fill in the blanks (5 Marks)

- 1) The answer of a division sum is called _____
- 2) If a number is divided by itself, we get _____ as quotient.
- 3) A number can not be _____ by a number larger than itself.
- 4) A number having 0 or 5 at ones place is divisible by _____
- 5) Dividend = Divisor X _____ + _____

8. A cow gives 161 litres of milk in a week. How many litres of milk is given by the cow in one day? (2 Marks)

ZONAL INSTITUTE OF EDUCATION & TRAINING, CHANDIGARH

Class: III


Sub: MATHS

Lesson 13 - Smart Charts !

1. Fill in the blanks. (3 Marks)

- 1) We use _____ mark to show numbers in smart chart.
- 2) Tally mark for 7 is _____
- 3) IIII III shows _____ number.

2. The given smart chart shows the number of different vehicles in a town. Study it and answer the following questions. (12 Marks)

1  = 10 vehicles.

Motor bike	
Scooter	
Auto rickshaw	
Car	
bus	


- (a) How many auto rickshaws are there ? _____
- (b) How many buses are there ? _____
- (c) How many cars are there ? _____
- (d) How many motor bikes are there ? _____
- (e) Which vehicle is maximum in the town? _____
- (f) Which vehicle is minimum in the town? _____
- (g) Which vehicle is 70 in number? _____
- (h) How many cars are more than the buses in the town? _____
- (i) How many bikes are more than the scooters in the town? _____
- (j) What is the total number of bikes and scooters ? _____
- (k) What is the total number of three wheeler vehicle? _____
- (l) How many vehicles are there in the town? _____

3. In a class of 30 students the following data was collected about the vegetables liked by the children. (10 Marks)

Lady finger _ 8, Cauliflower _ 8, potato _ 10, Spinach _ 4

Prepare a smart chart for the above data.

3. Read the smart chart and answer the following

1  shows 5 fruits

Apples	         
Mangoes	      
Oranges	    
Bananas	  
Grapes	   

(a) How many kinds of fruits are shown in the above smart chart? _____

(b) Which kind of fruit is the least? _____

(c) Which kind of fruit is maximum in number? _____

(d) Write the total number of fruits? _____

(e) How many mangoes are more than oranges? _____

4. Rahul, Ram, Radha and Ravi measured their length of their pencil. (10 Marks)

Rahul = 10 cm, Ram = 12cm, Radha= 16cm Ravi = 8 cm

Prepare smart charts for the above data in two different ways.

ZONAL INSTITUTE OF EDUCATION & TRAINING, CHANDIGARH

Class: III


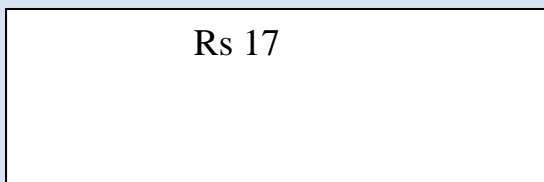
Sub: MATHS

Lesson 14 : **Rupees and Paise**

1. Fill in the blanks (6 Marks)

- 1) 100 paise = _____ rupee
- 2) There are 200 paise in _____ Rupees
- 3) _____ 25 paise coins make 1 rupee
- 4) Two 50 rupee note make _____ rupees
- 5) Rs 20 + Rs 30 = Rs _____
- 6) Rs 50 - Rs 30 = Rs _____

2. Draw coins and notes to make (4 Marks)



3. Write the correct rupees or paise (4 Marks)

- 1) 400 paise = _____ Rupees.
- 2) 700 paise = _____ Rupees
- 3) _____ paise = Rs 6
- 4) _____ paise = Rs 10

3) Add (4 Marks)

$$\begin{array}{r} \text{Rs } 1\ 2.5\ 0 \\ + \text{Rs } 1\ 3.0\ 0 \\ \hline \\ \hline \end{array}$$

$$\begin{array}{r} \text{Rs } 5\ 6.5\ 0 \\ + \text{Rs } 2\ 8.2\ 5 \\ \hline \\ \hline \end{array}$$

4) Cost of one chalk box is Rs 75. Find the cost of 5 such boxes. (2 Marks)

5) Subtract (4 Marks)

$$\begin{array}{r} \text{Rs } 4\ 2.5\ 0 \\ - \text{Rs } 1\ 3.0\ 0 \\ \hline \\ \hline \end{array}$$

$$\begin{array}{r} \text{Rs } 5\ 6.5\ 0 \\ - \text{Rs } 2\ 8.2\ 5 \\ \hline \\ \hline \end{array}$$

6) Rahul bought a saree for Rs 450 and a shirt for Rs 780. Find the total money he spent for both? (2 Marks)

7) Cost of 5 story books is Rs 100, find the cost of one story book? (2 Marks)

8) Cost of some items are given below. (4 Marks)

Pencil = Rs 4, Eraser = Rs2, Note book = Rs 10,
Colour box = Rs 4.50, toffee = Re1, lemon juice = Rs 6

What can you buy if you have twenty rupee note

(a) _____

(b) _____

What can you buy if you have thirty rupee note

(c) _____

(d) _____

9) Solve (4 Marks)

1) 745 paise = Rs _____

3) 650 paise = Rs _____

2) Rs 10 + 25 Paise = Rs _____

4) Rs40 +50 paise =Rs _____

3) Raghav bought 4 pencils for Rs 4 each, One geometry box for Rs 45, one story book for Rs 30 and 10 toffee for 50 paise each.

Prepare a bill for the above items. (4 Marks)

1: Poonam's Day Out

Section I : Q.1) A) Name any 2 domestic animals.

_____ , _____

B) Name any 2 wild animals.

_____ , _____

C) Name any 2 animals with long tail.

_____ , _____

D) Name any 2 birds.

_____ , _____

Section II : Q.2) Where do these animals /birds live ?

Lion _____

Crow _____

Snake _____

Elephant _____

Monkey _____

Parrot _____

Q.3) Match the following.

A cat

barks

A lion

chirps

A bird

hiss

A dog

croaks

A snake

mews

A frog

roars

Q.4) Write the correct answers.

1) An animal with short tail _____.

2) An animal with long trunk _____.

- 3) An animal with poison _____.
- 4) A bird who dances after rain _____.
- 5) Our national animal _____.
- 6) A bird with strong beak _____.

Q. 5) Make 2 beautiful animals using finger prints.

Section III: Q.6) Answer these questions.

1) Name any 4 animals that live in water.

_____ , _____ , _____ , _____

2) Which animals do you see on the branches?

_____ , _____ , _____ , _____


3) Write 4 animals that crawl.

_____ , _____ , _____ , _____

4) Write 4 lines about elephant.

2. The Plant Fairy

Section I : Q.1) Write the different parts of the plant.



Q.2) recall your observation & Find the answers-

1. Do all the leaves have same size ?

Ans. _____


2. Do all the leaves have same colour ?

Ans. _____

3. Do all the leaves have same shape

Ans. _____

Section II :Q.3) Identify the leaves and write the answer.



1) Which leaves are used in pooja ? _____

2).Which leaves make our palm red? _____

3. Which leaves are used as mouthfreshners? _____

4. Which leaves are used to make brooms? _____

5. Which leaves give the smell of its fruit ? _____

Q.4) Which part of the plant is it? (fruit ,flower, root , leaves ,stem)

1) Potato _____

4) Carrot _____

2) Tomato _____

5) Cauliflower _____

3) Spinach _____

Q.5) Fill in the blanks.

1) Big trees has thick stem which is called as _____.

2) Plant with weak stem is called as _____.

3) _____ spread on the ground.

4) _____ are small plants.

5) The plant which take support to climb is called _____.

Q.6) Write 2 examples each.

1) 2 shrubs = _____ , _____

2) 2 climbers = _____ , _____

Section III :Q.7) Answer these questions.

1) Name the 2 roots that you eat .

2) Name the 2 stems that you eat.

3) Name the 2 leaves that you eat.

4) Which types of plants are called herbs?

ZONAL INSTITUTE OF EDUCATION & TRAINING, CHANDIGARH

Class: III

Sub: EVS

3. Water O Water

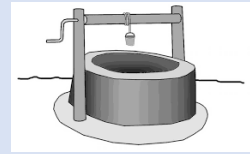
Section I : Q.1) Identify these sources of water.

(Tank ,River , Tap , Well , Waterfall , Sea , Rain ,Hand pump)



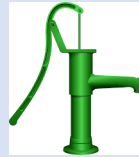














Section II: Q.2) Tick the activities for which water is needed? (√ or x)

Gardening

Drawing

To make table

To knead the atta

Writing

Cooking

Q.3) Write 6 uses of water.

a) _____

b) _____

c) _____

d) _____

e) _____

f) _____

Q.4) Write odd one out.

1) Washing , cooking , writing , drinking ()

2) Jumping , River , playing , dancing ()

3) Tortoise , monkey , fish , crocodile ()

4) Drinking , handpump , river ,tap ()

5) Garden , flower , tree , sea ()

6) Car , bus , boat , train ()

Section III :Q.5) **Given in the grid are some places where water is found**

Find them and put a circle around each and write them below.

W	A	T	E	R	F	A	L	L
E	L	A	K	E	R	P	X	Q
L	S	E	A	S	A	O	M	T
L	W	I	Q	Y	I	N	N	A
R	I	V	E	R	N	D	Y	P

1.

1. _____

2. _____

3. _____

4. _____

5. _____

6. _____

ZONAL INSTITUTE OF EDUCATION & TRAINING, CHANDIGARH

Class: III

Sub: EVS

4. Our First School

Section I : Q.1) Identify and name the following pictures.

(brother , grandmother , mother , sister , father , grandfather)



Q.2) Who cooks food in your family?

Section II :Q.3) Write the names of your family members.

Names

Relationship

1. _____

Father

2. _____

Mother

3. _____

Grand Father

4. _____

Grand Mother

5. _____

Brother

6. _____

Sister

7. _____

Cousin

8. _____

Uncle

Q.4) Fill in the blanks.

1) We learn many things in our _____.

2) Every family has it's own _____.

3) Family members _____ and _____ each other.

4) Family members resembles with _____ other.

Q.3) Observe puzzle to find out relations.

W	O	D	A	G	H	F	H	Y	S	R	T	U	U	W	H	W
V	T	C	Z	B	J	G	T	W	D	R	G	E	Y	S	W	E
B	H	R	W	N	K	N	V	S	C	F	R	D	H	C	R	R
N	E	T	S	Y	U	F	B	D	V	V	A	W	G	V	T	T
M	R	G	X	A	L	V	F	F	R	G	N	E	D	T	Y	Y
A	Q	H	E	U	I	G	D	E	C	B	D	R	Y	G	U	U
S	W	S	D	I	O	H	H	F	E	N	M	T	R	H	I	I
D	E	R	F	O	U	T	E	W	S	C	O	U	S	I	N	O
F	R	F	G	P	A	T	D	X	R	E	T	T	I	J	Y	P
G	U	H	H	F	Y	R	G	R	F	D	H	G	S	K	R	A
H	N	N	I	Y	H	B	R	O	T	H	E	R	T	L	F	S
J	E	I	C	F	G	T	H	E	R	S	R		E	Y	G	D
K	C	J	U	L	H	T	D	G	H	J	K	L	R	Y	K	F
L	L	D	I	F	E	D	Q	W	E	R	T	Y	U	E	R	T
B	C	D	E	T	T	Q	A	S	A	S	R	T	Y	U	W	E

1) _____

2) _____

3) _____

4) _____

5) _____

6) _____

7) _____

8) _____

.Q.5) Draw

a picture of your house.

Section III: Q.6)

Answer these

questions.

1) Which is our first school?

2) How many members are there in your family?

3) What do we learn from our family ? Write 4 things.

ZONAL INSTITUTE OF EDUCATION & TRAINING, CHANDIGARH

Class: III

Sub: EVS

5. Chhotu's House

Section I :Q.1) Identify and name the different parts of the house.

(Kitchen , Hall , Bedroom , Bathroom , Toilet , Study room , Store room ,Kitchen garden



Section II : Q.2) Match the following

- | | |
|---------------|----------------------|
| 1) Hall . | To take bath |
| 2) Bed room | To study |
| 3) Kitchen | To Welcome the guest |
| 4) Bathroom | To cook |
| 5) Store room | To sleep |
| 6) Study room | To Store the things |

Q.3) Fill in the blanks.

- 1) My mother's mother is my _____.

2) My father's mother is my _____ - _

3) My mother's sister is my _____

4) My father's brother is my _____

5) My mother's brother is my _____ - _____

6) My father's father is my _____

Q.4) Draw your house and colour it.

Q.5) Write the names,

Your mother _____ Your father _____

Your grandmother _____

Your grandfather _____

Your full name _____

Section III : Q.6) Answer these questions.

1) How many members are there in your family.?

2) Why do we need a house?

3) Name the different parts of the house.

4) Where do we cook food?

ZONAL INSTITUTE OF EDUCATION & TRAINING, CHANDIGARH


Class: III

Sub: EVS

6. Food We Eat

Section I : Q.1) Name the food items.





Section II: Q.2) Write true or false against each statement in the box : =

1. Always wash your hands before eating.

2. Rahul likes to eat junk food.

3. Do not eat uncovered food as it attracts flies.

4. Fresh food do not makes us healthy.

5. Take that much food in your plate which you can eat.

6. Do not throw food in dustbin.

7. Veena always eats roadside food instead of home food.

8. Milk is a complete food.

9. Food is needed by everyone for growth and energy

!0) Eating fruits and vegetables is harmful for health.



C	A	U	L	I	F	L	O	W	E	R	R
A	O	N	I	O	N	E	R	O	R	P	A
B	P	E	A	N	P	M	A	N	G	O	D
B	P	E	A	R	A	O	N	B	U	T	I
A	P	P	L	E	P	N	G	A	A	A	S
G	U	A	V	A	A	E	E	N	V	T	H
E	P	A	P	A	Y	Y	A	A	S	O	G
B	R	I	N	J	A	L	P	N	O	R	A
G	G	R	A	P	E	S	P	A	L	E	N

Q.3) Find out names of vegetables and fruits in the word box and write down.

Vegetables : _____

, _____ , _____

_____ , _____

Fruits: _____ , _____ , _____

_____ , _____

Q.4) Match the following.

Wheat

Sambar

Rice

Ice cream

Curd

Chappati

Dal

Pulav

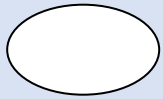
Section III : Q.5) Answer these questions.

1) Draw 4 food items that we get from wheat.

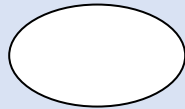
2) Draw 4 food items that we get from rice.

7. Saying Without Speaking

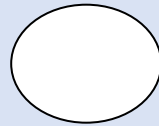
Section I : Q.1) Show the emotions by drawing it.. = -




Happy face



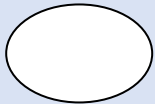
Sad face



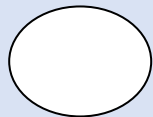
Angry face



Crying face



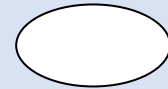
Shy Face



Hungry face



Sleepy face



fearful face

Section II : Q.2) Write true or false.

- 1) Blind people unable to see. ()
- 2) We feel with our ear. ()
- 3) We hear with our nose. ()
- 4) Deaf people unable speak. ()
- 5) We smell with our nose. ()
- 6) We see with our eyes. ()
- 7) Dumb people unable to hear. ()
- 8) We use 5 sense organs. ()

Q.3) Draw and write the function of 5 sense organs.

Q.4) Match the following.

Those who unable to hear	blind
Those who unable to see	Handicap
Those who unable to speak	deaf
Whose body parts donot work properly	dumb

Q.5) Draw any 1 mudra.

Section III : Q.6) Answer these questions.

a) Why do blind people use white stick?

b) Which people use sign language?

c) Who use Braille script?

d) How many sense organs do we have? Name them.

ZONAL INSTITUTE OF EDUCATION & TRAINING, CHANDIGARH


Class: III

Sub: EVS

8. Flying High

Section I : Q.1) Name the birds given below.





Section II : Q.2) Write any 3 birds that you see in the water.

_____, _____, _____

Q.3) Name the 4 birds that you see on the tree.

_____, _____, _____, _____

Q. 4) Name the 3 birds that you see on the ground.

_____, _____, _____

Q. 5) Match the following.

Crow

fly high in the sky

Pigeon

beautiful feathers

Eagle

sweet voice

Parrot

has gray feather and pink beak

Mynah

black beak

Peacock

red beak

Q.6) Find the names of any 8 birds from the given puzzle.

A	F	P	E	A	C	O	C	K	F	G	V	B	E	T
S	C	D	C	V	T	Y	U	O	P	F	G	H	J	L
D	V	G	E	R	D	U	C	K	Z	X	C	F	G	H
F	P	C	V		F	G	H	O	R	V	F	V	Y	H
G	X	A	A	V	B	N	M	E	C	C	S	U	E	R
H	W	B	R	A	S	D	C	L	C	V	E	L	V	R
J	E	R	F	R	C	R	F	V	C	A	S	T	F	G
K	C	X	W	E	O	W	V	D	A	C	D	U	E	R
L	S	X	Z	S	C	T	C	X	S	W	C	R	O	W
M	A	D	S	A	Z	X	C	X	X	Z	Z	E	X	C
W	O	O	D	P	E	C	K	E	R	A	Z	X	D	C
B	S	W	D	C	X	A	I	X	F	V	X	Z	S	W
Z	T	L	J	G	D	F	T	R	F	C	V	O	W	L
B	R	M	N	B	V	C	E	C	Z	X	M	C	B	C
X	I	L	K	J	H	G	F	D	S	A	Q	E	R	T
C	C	A	Q	W	E	R	T	Y	U	I	O	P	H	U
V	H	A	Z	X	D	F	G	H	J	K	L	M	N	O
B	Q	W	E	R	T	Y	U	I	O	P	A	Z	X	C

1) _____

2) _____

3) _____

4) _____

5) _____

6) _____

7) _____

8) _____

Section III : Q. 7) Answer these questions.

1) Which are the different body parts of the birds ?

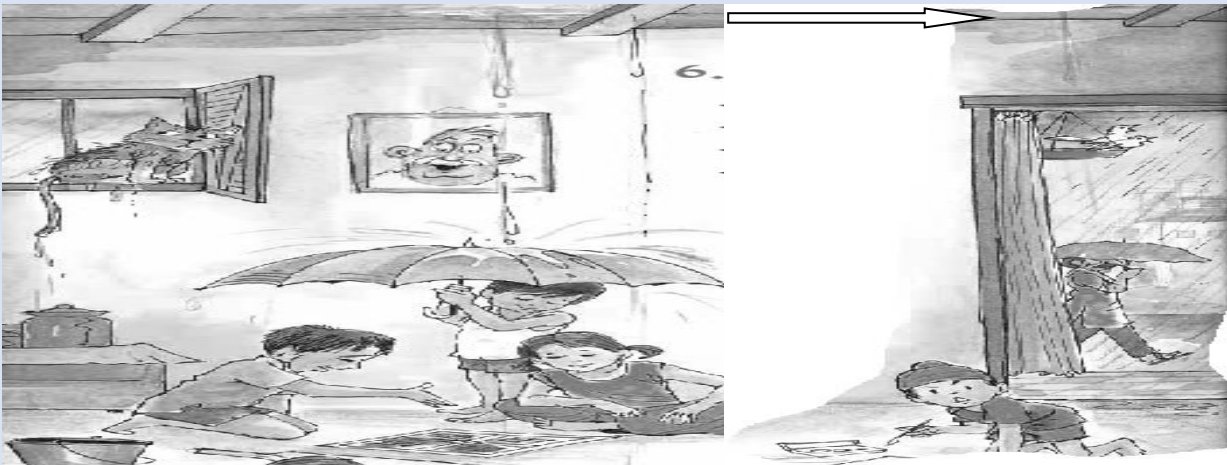
2) Which bird sleep in the day and wake up at night?

3) Which 2 birds fly very high and are very big ?

4) Which bird imitate human voice?

Q1. Observe the WATER CYCLE and label it.

Q Observe the picture and write five sentences about it.



Q2. Name any five things which can be seen on the rainy day.

- | | |
|----------|--------|
| 1. ----- | 2----- |
| 3----- | 4----- |
| 5----- | |

Q3. Write five uses of water .

- | | |
|--------|--------|
| 1----- | 2----- |
| 3----- | 4----- |
| 5----- | |

Q4. Write names of any five animals.

- | | |
|----------|--------|
| 1. ----- | 2----- |
| 3----- | 4----- |
| 5----- | 6----- |

Q5. Draw a RAINBOW and colour it.



Q6. Draw two different types of clouds and colour it.

10. What Is Cooking?

Q1. Observe the following utensils and write its names.



Q2. Match the following .

Food items

Method of cooking

1. Boiling
2. Frying
3. Steaming
4. Roasting
5. Baking

- samosa
- rice
- cake
- papad

Q3. Write any five things that are eaten .

Raw	cooked	cooked and raw both
1. -----	-----	-----
2. -----	-----	-----
3. -----	-----	-----
4. -----	-----	-----
5. -----	-----	-----

Q5 Write the recipe of TEA

1. -----
2. -----
3. -----
4. -----
5. -----

Q6. Draw the pictures of

Gas stove	Chulha	Solar cooker
Kerosene Oil stove	Coal woven	Electricity woven

11. From Here to There

Q1. Observe the pictures and answer the questions.



Q2. Write any two-

- 1. Animals used in the transportation-----
- 2. Two wheeler vehicles -----
- 3. Three wheels vehicles -----
- 4. Air transport -----
- 5. Water transport -----

Q3. Match the followings.

Vehicles

Uses

1. Police van


to carry patients

- | | |
|--------------|------------------------------|
| 2. Ambulance | to carry thieves and robbers |
| 3. Post van | to carry mails and parcels. |
| 4. Tractor | to carry passengers |
| 5. Train | to plough fields. |

Q4 Write TRUE or FALSE.

- | | |
|---|-------|
| 1. Bicycle is the fastest means of transport. | ----- |
| 2. Rocket swims in the water . | ----- |
| 3. Camle cannot walk in the sand . | ----- |
| 4. Metro train can be seen in the villages. | ----- |
| 5. Bullock carts cannot seen in big cities. | ----- |

Q Draw , colour your dream vehicle and write five sentences about it.



Q1. Observe the picture and answer the questions.



1. What is the woman doing in front of post office? -----
2. Where is the meson standing? -----
3. Who contorlls the traffic? -----
4. Who all are running? -----
5. For whom the cobbler is waiting ? -----

Q2. Write the work of

They are called as

Work they do

1. Doctor -----
2. Nurse -----
3. Diver -----
4. Gardener -----
5. Teacher -----

- 6. Student -----
- 7. Policeman -----
- 8. Watchman -----
- 9. Scientist -----
- 10. Lawyer -----

Q3 Write down the works you like to do

In the school

at the home

- 1-----
- 2-----
- 3-----
- 4-----
- 5-----


Q4. Write down the works that you don't like to do

In the school

at the home

- 1-----
- 2-----
- 3-----
- 4-----
- 5-----

Q5 Show time in the clock and complete daily activities of your mother.





Wake up



Start cooking



Pack your tiffin



ZONAL INSTITUTE OF EDUCATION & TRAINING, CHANDIGARH

Class: III

Sub: EVS

13. Sharing Our Feelings

Q1. Observe the picture and answer the questions.



1. What is Raju is doing?

Ans-----

2. Why did Raju wear a dark goggles?

Ans-----

3. How does he walks?

Ans-----

4. Can he go to the school?

Ans-----

5. What other things he can do well?

Ans-----

Q2. Write the problems being faced by

1. Blinds -----

2. Lamb -----

3. Deaf -----

4. Dumb -----

5. Old man -----

Q2. How you will help for -

1. Blinds -----

2. Lamb -----

3. Deaf -----

4. Dumb -----

5. Old man -----

Q3. Write five sentences about the Braille script.

Q4. Write your experience with any person with disabilities
[having some problem in the body]



14. The Story of Food

Q1. Choose and write

Carrot,	ginger,	potato,
raddish ,	turnip,	spinach,
mint ,	banana flower	apple,
berry		

- | | | |
|-----------|-------|-------|
| 1. Roots | ----- | ----- |
| 2. Flower | ----- | ----- |
| 3. Stem | ----- | ----- |
| 4. Leaves | ----- | ----- |
| 5. Fruit | ----- | ----- |

Q2. Identify the following things and

- Make  around things we get from animals .
- Make  around things we get from trees and plants.

Honey roti curd meat

Rice eggs daal mango juice

Jalebi ghee

Q3. Write when we use these medicinal plants.

1. Tulsi -----
2. Aniseed -----
3. Ajwain -----
4. Clove -----
5. Neem -----

15. Making Pots

Q1. Observe the pot making picture and answer the questions.



1. Write six things used in the pot making.

2. Write four things made from the clay.

Q2. Arrange the jumbled sentences into the correct order and re-write it.

1. decorating with paints
2. adding water into the clay.
3. backing into the kiln.
4. kneading mud and making dough.
5. leaving into the sunlight for drying .
6. giving shape on the potters wheel.

- 1-----
- 2-----
- 3-----
- 4-----
- 5-----
- 6-----

Q3. Write any utensils made up of –

- Plastic -----
- Bronze -----
- Glass -----
- Paper -----
- Stainless-steel -----

Q4 Draw things made from the caly.

Bowl	Glass	Cup
Lamp	Surai	

16. Games We Play


Q1. Observe the the thing, name it and write games and sports related to it.













Q2. Identify the types of games and draw  for INDOOR and for  for OUT DOOR games .

Football	Carom	Chess	Stappoo	Top

Marbles	Kho-kho	Hockey	Golf	Ludo
---------	---------	--------	------	------

Q3. Name any five games played by your grandparents while of your age.

1. -----
2. -----
3. -----
4. -----
5. -----

Q4. Write 10 games which can be played without ball.

- -----
- -----
- -----
- -----
- -----

Q5. Draw .

Bat	Hockey stick	Dice – number 3
Top	Skating shoes	

ZONAL INSTITUTE OF EDUCATION & TRAINING, CHANDIGARH

Class: III

Sub: EVS

17. Here Comes A Letter

SECTION A

Write the odd one out in the box

1) Postcard, inland letter, paper, envelope

2) Post office, potter, letter box, stamp

3) Name, place, animal, PIN code

4) Mail van, Letter box, Post office, Railway station

5) A _____ brings letter to us.(Superman , Post man)

6) Letters to be sent are dropped in a _____ (Letter box, Junk box)

7) In olden days letters were sent by _____ (Parrot, Pigeon)

8) _____ is the cheapest among letters.(Envelope, Postcard)


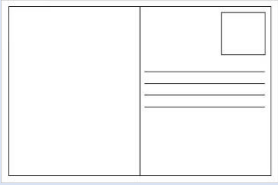
SECTION B

1) Write your home address

2) Which is the fastest means of communication?

3) How do we send e- mails?

4) Name two things you get in a post office? _____



5) What does PIN stand for? _____

6) Who collects letters from the post box/

7) How will you send a letter to your friend living in another country?

8) How were letters sent in olden days?

9) Why do we write PIN code on the letter?

SECTION C

1) What are the advantages of a mobile phone? Mention any two

2) What do you prefer writing a letter or talking on a phone Why?

3) Write the steps through which a letter would reach you?

18. A House Like This

SECTION A

MATCH THE FOLLOWING

- | | |
|------------------------|---|
| a) Early men lived in | i) temporary houses. |
| b) Igloos are found in | ii) Helps rain water and snow to flow down. |
| c) Sloping roof | iii) are found in places having heavy rainfall. |
| d) Tents are | iv) snow covered area. |
| e) House on stilts | v) caves |

FILL IN THE BLANKS (Kutch, Home, Pukka)

- 1) A _____ is a place where we live safely.
- 2) A house made of bricks, stones and cement is called _____ house.
- 3) A house made of straw, mud and leaves is called _____ house.

SECTION B

- 1) Why do we need a house?

- 2) Why do people of Assam live in houses built on stilts?

- 3) Why people of hilly areas build houses with sloping roof?

- 4) Where do we see multi- storeyed buildings? _____

5) Why do people of Rajasthan plaster walls of their houses with mud?

6) Give two examples of temporary houses

7) Why are igloo dome shaped?


8) Write two differences between pukka kutcha houses

SECTION C

1) How is house boat different from other houses?

2) Why houses in earthquake prone areas are made by wood?

3) Name the houses and Write about these houses



ZONAL INSTITUTE OF EDUCATION & TRAINING, CHANDIGARH

Class: III

Sub: EVS

19. Our Friends Animals

SECTION A

COMPLETE THE GIVEN TABLE

Name of the animal	Food they eat
1) Parrot	
2) Cow	
3) Dog	
4) Cat	
5) Horse	
6) Sparrow	
7) Donkey	

8) Lion	
---------	--

SECTION B

1) NAME ANY FOUR ANIMALS

a) You have touch _____

b) You can to _____

c) You cannot touch _____

3)NAME TWO ANIMALS WHO CAN

Bite us _____

Harm us _____

Eat us _____

4) Who was hurt? _____

5) Why do we keep these animals?


Cat	
Dog	
Cow	
Hen	
Fish	
Horse	
Parrot	
Donkey	

SECTION C

1) Why do we keep pet in our house?

2) Write five lines on your favourite animal.

3) Colour the animals which are kept as pet animals



ZONAL INSTITUTE OF EDUCATION & TRAINING, CHANDIGARH

Class: III

Sub: EVS

20. Drop by Drop

SECTION A

FILL IN THE BLANKS

- 1) Even a single drop of water should be _____ (saved, wasted)
- 2) People dig a pit in their courtyard to _____ rain water. (Collect, waste)
- 3) Water is more used during _____. (Winter, summer)
- 4) Tanka is kept covered with a _____. (Lid, bucket)

WRITE TRUE OR FALSE

- 1) Water is precious we should not waste it. _____
- 2) Water can be reused. _____
- 3) Two table spoons of water fill a bucket. _____
- 4) Do not let the water run while brushing teeth. _____

SECTION B

- 1) Write four sources of water _____
- 2) Write four uses of water _____
- 3) Write two ways in which water can be reused.

- 4) what all is seen around in Rajasthan?

- 5) In which season people of Rajasthan face the problem of water scarcity?

6) What is a Tank?

7) What is rain water harvesting?

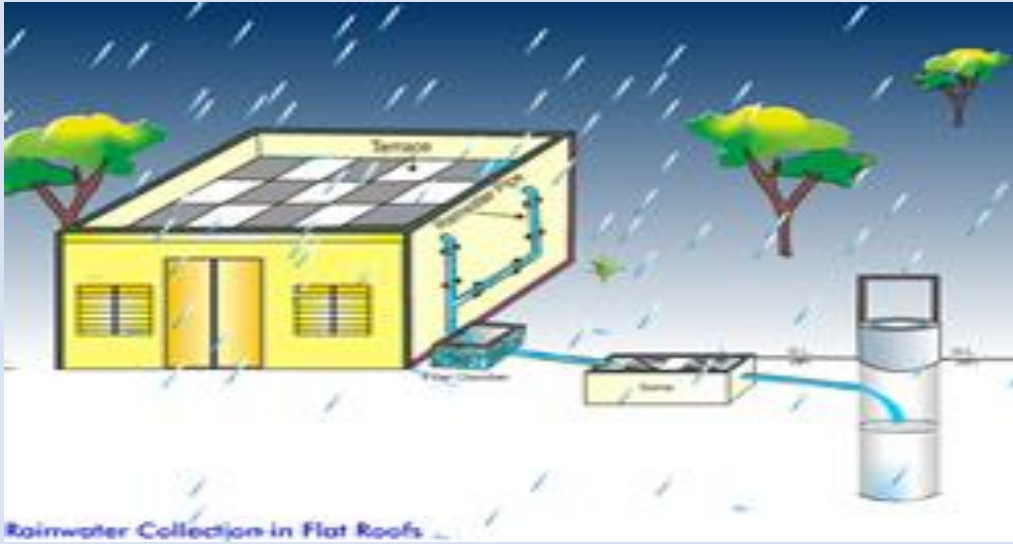
8) How much water is needed in your house?

SECTION C

1) Suggest some ways of saving water.

2) Besides drinking how water is used in your house?

3) Explain how water is collected in the given picture.



21. Families Can Be Different

SECTION A

FILL IN THE BLANKS

- 1) All of us live in a _____. (Family, neighbour)
- 2) We feel _____ in a family. (Unsafe, safe)
- 3) Our family _____ for us. (Care, neglect)
- 4) A small family is called _____ family. (Joint, nuclear)
- 5) A large family is called _____ family. (Joint, nuclear)
- 6) _____ is the main strength of the family. (Unity, money)
- 7) We receive _____ from our family. (moral values, nothing)
- 8) All family members share their _____ together. (Happiness, sun)

SECTION B

Write the relationship of these family members

- 1) Dada* Fathers _____
 - 2) Dadi* Fathers _____
 - 5) Nana * Mothers _____
 - 3) Chacha* Fathers _____
 - 4) Bua * Fathers _____
 - 6) Nani* Mothers _____
 - 7) Mama* Mothers _____
 - 8) Mausi* Mothers _____
- Q1) what is nuclear family _____

Q2) what is Joint family?

Q3) what do we learn in a family?

Q4) who Takes care of you in the family?

Q5) what do you do in holidays?


Q6) what work is done by each family member in your house?

Q7) who earn money in your family?

Q8) how does family members entertain themselves

SECTION C

Write the names of your family members in the given family tree with the relationship



ZONAL INSTITUTE OF EDUCATION & TRAINING, CHANDIGARH

Class: III

Sub: EVS

22. Left – Right

SECTION A

- 1) Name four directions _____
- 2) The sun rises in the _____ (East, West)
- 3) The sun sets in the _____ ((East, West)
- 4) I write with my _____ hand. (left,right)
- 5) We follow _____ to go from one place to another. (Directions, other people)
- 6) Zebra crossing on a road is for _____ to cross it. (Vehicles, pedestrians)
- 7) A Red Cross symbol means that there is a _____ nearby. (Hospital, hotel)

8) The two ends of the magnet points towards North and _____directions. (North, South)

SECTION B

Q1 what is map?

Q2 Why some symbols are used in map?

Q3 Write any four symbols we use in mathematics. What do they indicate?

Q4 what are land marks?

Some road signs are given below write what they indicate

HELP BOX No parking, Speed limit, Narrow road ahead, School ahead,
Railway crossing ahead, No U turn, Speed breaker ahead No right turn



SECTION C

Q1 How landmarks are useful in finding our way?

Q2 Name any six landmarks that you see in your way from home to school

Q3 Draw

* a book above the girl

*A cat on girls right

* A chair on girls left

* A tree below her



ZONAL INSTITUTE OF EDUCATION & TRAINING, CHANDIGARH

Class: III

Sub: EVS

23. A Beautiful Cloth

SECTION A

Q1 which of the following is an unstitched dress. Underline them.

Frock	dupatta	Shirt	Saree	Lahanga	Shorts
Turban	Tie	Dhoti	Lungi	Scarf	Salwar
Pyjama	Shawl	Skirt	Blouse	Pants	Kurta

Q2 Fill in the blanks

Rough	winter	summer	smooth
-------	--------	--------	--------

- 1) Cotton cloth is good to wear in _____
- 2) Woolen cloth is good to wear in _____
- 3) The texture of silk cloth is _____
- 4) The texture of khadi is _____

Section B

Write the dresses commonly worn in these states

Jammu and Kashmir

Punjab

West Bengal

Rajasthan

Maharashtra

Gujarat

HELP BOX	Dhoti Kurta	Salwar Kameez	Lehanga choli
	Phiran and salwar	Saree with one end on shoulder	
	Kurta pyjama and Turban		

Q1 write four names of stitched dresses

Q2 write four names of unstitched dresses

SECTION C

Q1 Write four unstitched clothes which are used in furnishing our house

For example Bed Sheet

Q2 Write names of four textures of cloth with two uses

For example Cotton Shirts sarees

ZONAL INSTITUTE OF EDUCATION & TRAINING, CHANDIGARH

Class: III

Sub: EVS

24. Web of life

SECTION A

1) Circle man made things

Book	Sun	Tree	Pencil	Shirt	T V
Lion	House	Cow	Parrot	Phone	Car
Moon	Snake	Pot	Water	Rain	Wind

2) Circle Natural things

Book	Sun	Tree	Pencil	Shirt	T V
Lion	House	Cow	Parrot	Phone	Car
Moon	Snake	Pot	Water	Rain	Wind

SECTION B

1) Write four living things

2) Write four nonliving things

COMPLETE THE FOLLOWING STATEMENTS

A) For making a house we need _____

B) For making a nest bird needs _____

C) For cooking food we need _____

Fill in the blanks

- 1) Trees give us fruits and _____ (wood, coal)
- 2) Clay pits are found near _____ (Garden, River)
- 3) Water, Sun, and air are _____ to us. (Not important, important)
- 4) Birds depend on _____ for their food. (Nature, Soil)

SECTION C

How are the following things important in our life?

Water _____

Sun _____

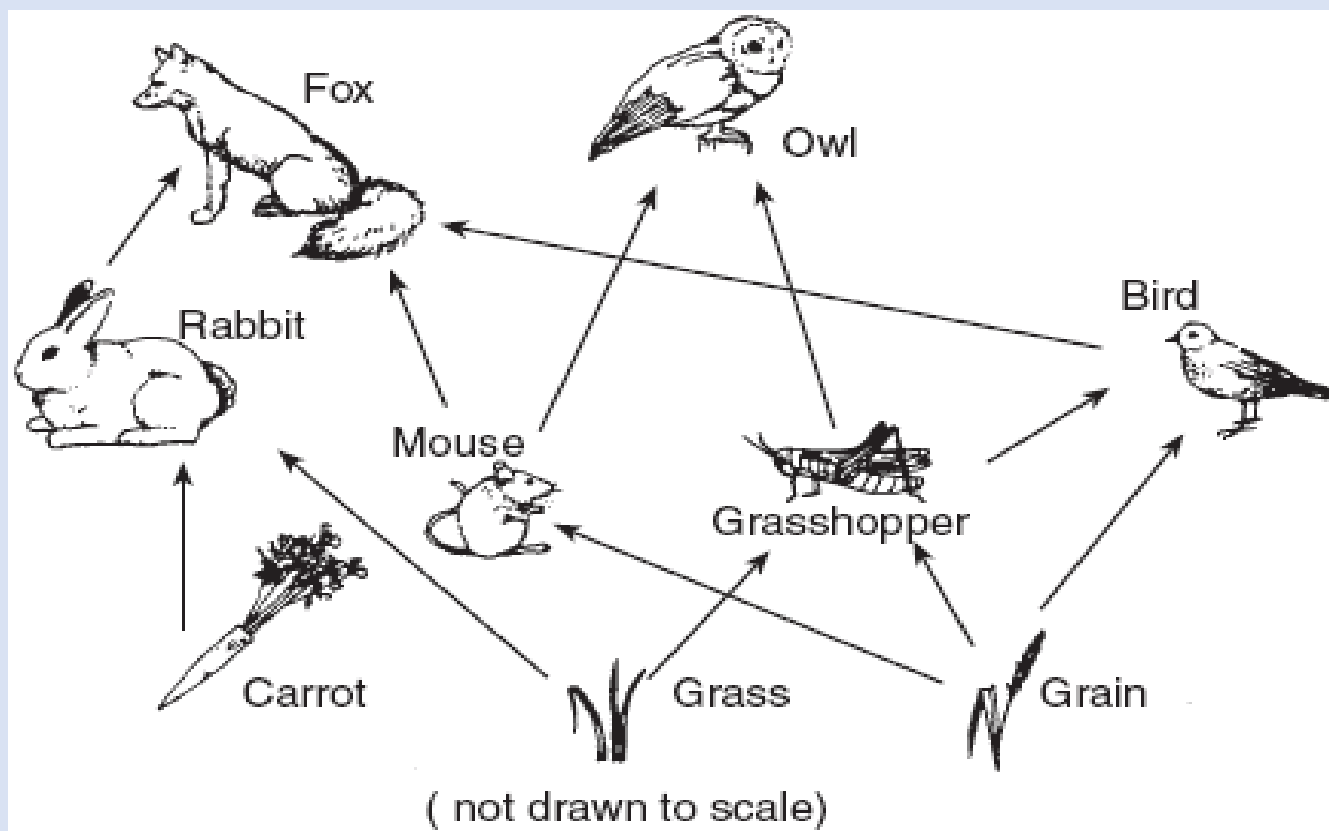
Plants _____

Air _____

House _____

Write which animal is eating what For Example Bird eats grain

_____	_____
_____	_____



शिक्षा एवं प्रशिक्षण आंचलिक संस्थान, चंडीगढ़

कक्षा 3 - हिन्दी

पाठ 1 कक्कू (कविता)

विभाग अ

१ तुकात्मक शब्द मिलाओ ।

१ कक्कू होता

२ रोता सककू

२ सही अर्थ पर गोला लगाओ । १ मिसरी = मीठी , कड़वी नमकीन

२ झक्कू = भोला ,मोटा, झगड़ालू

३ सही या गलत लिखो १ कक्कू दिनभर रोता है । ()

२ कक्कू बात - बात पर नहीं चिढ़ता । ()

४ इनमे से पक्षियों के नाम पर गोला लगाओ ।

१ कोयल २ हाथी ३ तोता ४ बन्दर

विभाग ब

१ तुकात्मक शब्द लिखो ।

१ कक्कू-----२ बोली -----३ गाए-----४ भक्कू -----

२ अर्थ लिखो । १ सदा = ----२ भक्कू = -----३ तनिक =-----४ गोलू = ----३

३ उलटा अर्थ लिखो । १ जाता -----२ रोता ----- ३ मीठी -----४ इसको -----

४ संज्ञा शब्द पर गोला लगाओ | १ कक्कू माने कोयल होता |

२ आम एक फल है |

५ ऐसे दो शब्द लिखो जिसमें क्क हो १-----२ -----

६ ऐसे दो शब्द लिखो जिसमें म्म हो १-----२ -----

७ कक्कू कोयल से किन - किन बातों में अलग है -

१ कक्कू रोता है | २ -----३ -----
-----४ -----

विभाग क

१ कविता से अलग तुकात्मक शब्द लिखो |

१ -----,-----२ -----,-----

२ वाक्य बनाओ १ मिसरी -----२ गाना -----

३ तुम्हें ये किस - किस नाम से बुलाते है

१ मम्मी ----- २ पापा -----दोस्त -----

४ जब तुम्हें कोई चिढ़ाता है तब तुम्हें कैसा लगता है इस पर कुछ वाक्य लिखो |

शिक्षा एवं प्रशिक्षण आंचलिक संस्थान, चंडीगढ़

कक्षा 3 - हिन्दी

पाठ 2 शेखीबाज़ मक्खी

विभाग अ

१ सही शब्द पर गोला लगाओ

१ नींद नीनद २ णाक नाक

२ सही अर्थ पर गोला लगाओ । १ भोजन = खाना , खेलना , तैरना

२ स्नान = दौड़ना , नहाना , रोना

३ लिंग बदलो १ शेर -----(शेरनी , मोरनी)

२ बाघ -----(बाघिन शेरनी)

४ सही उत्तर पर गोला लगाओ ।

१ कौन आग बबुला हो उठा ? उत्तर १ शेर २ हाथी

१ कौन घमंडी था ? उत्तर १ बकरी २ मक्खी

विभाग ब

१ शब्द पूरे करो । १ जं--ल २ दहा-- ३ व--ना ४ रा ---

२ अर्थ लिखो । १ गुस्सा =-----२ जवाब =-----३ प्रणाम = -----४ हिम्मत = ---

३ लिंग बदलो । १ हाथी -----२ -----३ बकरी -----४ राजा -----

४ उलटा अर्थ लिखो । १ हाँ -----२ धीरे -----३ दिन -----४ आयी -----

१ शेर भोजन करके क्या कर रहा था ?

उत्तर -----२ शेर को गुस्सा क्यों आया ?

उत्तर -----

३ इनके बारे में दो - दो वाक्य लिखो ।

१ शेर -----

२ मकड़ी -----

विभाग क

१ इस पाठ के कौनसे शब्द तुम्हें नवीन लगे लिखो । १ -----२ -----

२ मुहावरों से वाक्य बनाओ ।

१ घमंड से चूर होना -----

२ शेखी बघारना -----

३ शेखीबाज मक्खी कहानी को और कोई नाम दो -----

४ जब तुम्हें कोई परेशान करता है तब तुम क्या करते हो ?

शिक्षा एवं प्रशिक्षण आंचलिक संस्थान, चंडीगढ़

कक्षा 3 - हिन्दी

पाठ 3 चाँद वाली अम्मा

विभाग अ

- १ सही शब्द पर गोला लगाओ | १ समय शमेय २ कमर कम
२ सही अर्थ पर गोला लगाओ | १ रात -- आसमान रात्री चाँद
२ पास ---- आस नजदीक खास
३ इनमें से खेलों के नाम पर गोला लगाओ |
१ लूडो २ खाना बनाना ३ झाड़ू ४ रस्साकशी
४ सही उत्तर पर गोला लगाओ |
१ अम्मा को कौन तंग करता था ? उत्तर १ चाँद २ आसमान
२ बूढ़ी अम्मा झाड़ू पकड़कर कहाँ पहुँच गई ? उत्तर १ आसमान में २ नदी में

विभाग ब

- १ शब्द पूरे करो | १ सुब --- २ अ---ली ३ झ--ड़ा ४ मद-----
२ अर्थ लिखो | १ अम्मा= ---२ आसमान = -----३ सुबह = -----४ थोडा = --
३ उलटा अर्थ लिखो | १ बहुत ----२ दिन -----३ आना -----४ पकड़ना ---
४ संज्ञा शब्द पहचानो | १ एक बूढ़ी अम्मा थी | ()
२ अम्मा रोज आँगन में झाड़ू लगाती | ()
५ अम्मा को कौन परेशान करता ?

उत्तर -----६ अम्मा के साथ कौन - कौन
रहता ?

उत्तर -----७ घर की सफ़ाई के लिए क्या-
क्या चीज़े होनी चाहिए ? १ -----२-----

८ चाँद के बारे में कुछ वाक्य लिखो ।

विभाग क

१ इस पाठ के कौन से शब्द तुम्हें नवीन शब्द लगे लिखो । १ -----२-----

२ क्रियाशब्द पहचानो । १ अम्मा सुबह उठकर कुँए से पानी लाती । ()

२ आसमान उसे तंग करता । ()

३ पर्यायवाची शब्द लिखो । १ आसमान १ -----२-----

२ चाँद १ ----- २-----

४ अपनी नानी के बारे में कुछ वाक्य लिखो ।

शिक्षा एवं प्रशिक्षण आंचलिक संस्थान, चंडीगढ़

कक्षा 3 - हिन्दी

पाठ 4 मन करता है (कविता)

विभाग अ

१ तुकात्मक शब्दों की जोड़ी बनाओ ।

१ घर लगाऊँ

२ दिखाऊँ पर

२ सही अर्थ पर गोला लगाओ । १ चंदा = १ चन्द्र २ पहाड़ ३ थैली

२ अकड़ = १ ऊपर २ रौब ३ सपना

३ इनमें से तुम्हें आसमान में क्या -क्या दिखाई देता है ?

१ बादल २ मछली ३ सूरज

४ चाँद किस पर अकड़ दिखाता है ? सही पर गोला लगाओ । १ पेड़ पर २ तारों पर

५ बाबा किस पर अकड़ दिखाते हैं ? सही पर गोला लगाओ । १ घर पर २ स्कूल पर

विभाग ब

१ तुकात्मक शब्द लिखो ।

१ लगाऊँ -----२ करता -----३ बढ़ाऊँ -----४ घर -----

२ उलटा अर्थ लिखो । १ मीठे -----२ दूर -----३ देना -----४ हँसना-----

३ अर्थ लिखो | १ चिड़िया = -----२ आसमान = -----३ सूरज = -----४ धौंस -----

४

सूरज आसमान में क्या करेगा ? उत्तर -----

५ कविता में लड़का किसकी तरह अपनी मूँछ बढ़ाना चाहता है ?

उत्तर -----

६ पंक्तियाँ पूरी करो | १ मन करता -----

-----|

७ तुम्हें किन - किन बातों के लिए मना किया जाता है ? १ -----२ -----

-----३ -----

विभाग क

१ इस कविता से अलग अन्य कुछ तुकात्मक शब्द सोचो और लिखो |

१ -----, ----- २ -----, -----

२ वाक्य बनाओ १ अकड़ दिखाना -----

२ शोर मचाना -----

३ अगर तुम्हारा क्या बनने का मन करता है ? क्यों ?

४ तुम्हें क्या- क्या करने के लिए मना किया जाता है ?

शिक्षा एवं प्रशिक्षण आंचलिक संस्थान, चंडीगढ़

कक्षा 3 - हिन्दी

पाठ 5 बहादुर बित्तो

विभाग अ १

- सही शब्द पर गोला लगाओ | १ केत खेत २ आकर अकर
- २ सही अर्थ पर गोला लगाओ | १ सुबह = रात सवेरा २ बीवी = पत्नी बहन
- ३ जोड़ी बनाओ |
- १ गाय बाघिन
- २ बाघ बैल
- ३ सही उत्तर पर गोला लगाओ | १ किसान की पत्नी का नाम क्या था ? १ बित्तो २ धन्नो
- ४ शेर ने किसान से क्या माँगा ? १ बैल २ चावल

विभाग ब

- १ शब्द पूरे करो | १ खे --- २ जवा--- ३ शे --- ४ ल ----
- २ अर्थ लिखो १ जवाब= -----२ तरकीब = -----३ मरियल = -----४ फौरन =-----
- ३ लिंग बदलो १ मोर ----- २ शेर ----- ३ पत्नी -----
- ४ राक्षस -----
- ४ उलटे अर्थ लिखो १ बहादुर -----२ जवाब -----३ ज़ोर से -----
- ४ उदास -----
- ४ किसने किससे कहा १ अगर तू बैल खा लेगा तो हम लोग भूखों मर जायँगे

उत्तर -----

२ तुम अपनी पूँछ भी अपनी पूँछ से बांध लो

उत्तर -----

५ बित्तो कैसी औरत थी ?

उत्तर -----

६ क्या शेर बित्तो से डर गया ?

उत्तर -----

विभाग स

१ इस पाठ के दो नवीन शब्द लिखो | १ ----- २-----

२ वाक्यांश के लिए एक शब्द लिखो | १जो खेत में काम करता हो -----

२ जो कमज़ोर और बीमार सा लगे -----

३ इन अर्थों के लिए शब्द लिखो | १ उत्तर = ----- २ उपाय = -----

४ शेर तो भाग गया सोचो और लिखो कि भेड़िये का हुआ होगा ?

शिक्षा एवं प्रशिक्षण आंचलिक संस्थान, चंडीगढ़

कक्षा 3 - हिन्दी

पाठ 6 हमसे सब कहते (कविता)

विभाग अ १ तुकात्मक शब्दों की जोड़ी बनाओ ।

१ फैलाओ बरसाई

२ आई जाओ

२अर्थ पर गोला लगाओ १ चन्द्र = बादल चाँद तारा २ सूरज= सूर्य बादल पानी

३ लिंग बदलो १ पापा -----२ भैया -----३ नाना -----४ दादा -----

३ सही उत्तर पर गोला लगाओ ।

१ धूप कौन फैलाता है ?

उत्तर -----२ खिलौने मत फैलाओ कौन कहता है ?

उत्तर -----

विभाग ब

१ इनका तुकात्मक शब्द लिखो । १ आई -----२ यहाँ -----३ कर -----४ सब---

२ अर्थ लिखो । १ सूर्य = -----२ बादल = -----३ हवा = -----४ जल = ---

३ घर से जुड़े शब्द पर गोला लगाओ ।

आँगन सड़क नहर कमरा रसोईघर जीना

३ अपने मनपसंद खेलों के नाम लिखो । १ -----२ -----

४ इस कविता के कवि नाम लिखो |-----

५ दिन के समय तुम्हें आसमान में क्या - क्या दिखाई देता है ?

उत्तर -----

६ अपने पापा के बारे में कुछ वाक्य लिखो ।

मेरे पापा का नाम -----

विभाग स

१ कविता के अलावा अन्य तुकात्मक शब्द लिखो |१ ----- २ -----

२ पर्यायवाची शब्द लिखो |१ जल ----- २ सूर्य -----

३ घर के अन्दर खेले जाने वाले खेल १ ----- २ ----- ३ ----- ४ घर के बाहर खेले जाने वाले खेल १ ----- २ ----- ३ -----

५ तुम्हें किन - किन कामों के लिए मना किया जाता है ? और क्यों ?

शिक्षा एवं प्रशिक्षण आंचलिक संस्थान, चंडीगढ़

कक्षा 3 - हिन्दी

पाठ 7 टिपटिपवा

विभाग अ

१ सही शब्द पर गोला लगाओ ।

१ बुढ़िया बुधिया २ सेर शेर ३ धोबी डोभी ४ पोता पोटा

२ सही अर्थ पर गोला लगाओ । १ शेरवा शेर घोड़ा बिल्ली २ बघवा बाघ बकरी गाय

३ सही उत्तर पर गोला लगाओ ।

१ पोता रोज रातको सोने से पहले दादी से क्या सुनता ? १ कविता २ कहानी

२ एक दिन कैसी बारिश हुई ? १ मूसलाधार २ हलकी - हलकी

विभाग ब

१ शब्द पूरे करो । १ बारि- २ टि-टिप ३ झोप- ४ महारा-

२ अर्थ लिखो । १ बचवा ----- २ किस्मत ----- ३ झटपट ----- ४ सुबह -----

३ लिंग बदलो । १ पोता ----- २ बुढ़िया----- ३ शेर ----- ४ बाघ -----

४ नामवाले शब्द लिखो । १ ----- २----- ३----- ४-----

५ वचन बदलो १ पोथी ----- २ कहानी ----- ३ आँख ----- ४ बिल्ली -

६ किसने किसने कहा ? १ हाँ बचवा न शेर डर ना बघवा का डर -----

७ लगता है यही टिपटिपवा -----

८ उत्तर लिखो १ सारा गाँव किससे परेशान था ?

८ अपनी दादी पर कुछ वाक्य लिखो ।

मेरी दादी माँ नाम -----

विभाग स १ अपनी मनपसंद कहानियों का नाम लिखो ।

१-----२-----३-----४-----

२ इस कहानी में पोता अपनी दादी से कहानी सुनने के लिए तड़प रहा था । तुम किन - किन चीजों के लिए तड़पते हो ?

में -----

३ बित्तो पर कुछ वाक्य लिखो ।

४ मूसलाधार बारिश में क्या - क्या हो सकता है ?

शिक्षा एवं प्रशिक्षण आंचलिक संस्थान, चंडीगढ़

कक्षा 3 - हिन्दी

पाठ 8

1. प्रश्नों के सही विकल्प पर सही (✓) का निशान लगाइए।
- (i) दोनों बिल्लियाँ क्या ढूँढ़ रही थीं?
- | | | | |
|--------------------|--------------------------|-----------------------|--------------------------|
| (क) खेलने की चीजें | <input type="checkbox"/> | (ख) खाने की चीजें | <input type="checkbox"/> |
| (ग) बैठने की जगह | <input type="checkbox"/> | (घ) इनमें से कोई नहीं | <input type="checkbox"/> |
- (ii) बिल्लियों के झगड़े का फैसला बंदर ने कहाँ बुलाकर किया?
- | | | | |
|---------------|--------------------------|-------------|--------------------------|
| (क) कचहरी में | <input type="checkbox"/> | (ख) घर में | <input type="checkbox"/> |
| (ग) सड़क पर | <input type="checkbox"/> | (घ) पेड़ पर | <input type="checkbox"/> |
- (iii) पूरी रोटी कौन खा गया?
- | | | | |
|-----------------|--------------------------|------------------|--------------------------|
| (क) काली बिल्ली | <input type="checkbox"/> | (ख) सफ़ेद बिल्ली | <input type="checkbox"/> |
| (ग) बंदर | <input type="checkbox"/> | (घ) चूहा | <input type="checkbox"/> |
- (iv) तराजू लेकर कौन भाग गया?
- | | | | |
|------------------|--------------------------|-----------------------|--------------------------|
| (क) बंदर | <input type="checkbox"/> | (ख) काली बिल्ली | <input type="checkbox"/> |
| (ग) सफ़ेद बिल्ली | <input type="checkbox"/> | (घ) इनमें से कोई नहीं | <input type="checkbox"/> |
- (v) कहानी में दोनों बिल्लियों को आप क्या कहेंगे?
- | | | | |
|---------------|--------------------------|------------|--------------------------|
| (क) चतुर | <input type="checkbox"/> | (ख) मूर्ख | <input type="checkbox"/> |
| (ग) सीधी—सादी | <input type="checkbox"/> | (घ) समझदार | <input type="checkbox"/> |
- (vi) दोनों बिल्लियाँ लड़ते हुए क्या बोल रही थीं?
- | | | | |
|----------------|--------------------------|--------------------|--------------------------|
| (क) दे जा रोटी | <input type="checkbox"/> | (ख) रोटी मेरी | <input type="checkbox"/> |
| (ग) मेरी ब्रेड | <input type="checkbox"/> | (घ) पूरी रोटी मेरी | <input type="checkbox"/> |
- (vii) बंदर तराजू में क्या तोल रहा था?

(क) बिल्ली का भार	<input type="checkbox"/>	(ख) रोटी के टुकड़े	<input type="checkbox"/>
(ग) दूध	<input type="checkbox"/>	(घ) बाट	<input type="checkbox"/>

2. सही कथन के सामने सही (✓) तथा गलत कथन के सामने गलत (×) का निशान लगाइए।

- (i) तराजू मेज़ पर रखा था।
- (ii) सफ़ेद बिल्ली को रोटी की महक पहले आई।
- (iii) रोटी मेज़ पर रखी थी।
- (iv) बंदर ने ठीक फ़ैसला किया।
- (v) दोनों बिल्लियाँ बंदर पर झपट पड़ीं।
- (vi) बिल्लियों को बिस्कुटों का पैकेट नज़र आया।
- (vii) दोनों बिल्लियों ने बड़े प्रेम से रोटी बाँटीं
- (viii) अंत में रोटी किसी भी बिल्ली को नहीं मिली।
- (ix) बंदर बची-खुची रोटी भी खा गया।

3. रिक्त स्थान भरिए।

- (i) दोनों बिल्लियाँ के लिए आपस में रही थीं।
- (ii) बंदर ने कहा—मैं तुम्हारा करूँगा।
- (iii) ने दोनों बिल्लियों से छीन ली।
- (iv) बंदर ने रोटी के दो कर दिए।
- (v) बंदर ने कहा—मैं की जड़ ही काट देता हूँ।
- (vi) रोटी को देख बिल्ली के आ गया।

4. निम्नलिखित प्रश्नों के उत्तर लिखिए।

- (i) रोटी पहले किसने देखी?

(ii) काली बिल्ली ने किसे, किस प्रकार से डरपोक साबित किया?

(iii) सफ़ेद बिल्ली ने रोटी पर अपना हक क्या कहकर जताया?

(iv) काली बिल्ली ने रोटी पर अपना हक किस प्रकार जताया?

(v) रोटी के लिए किनके बीच लड़ाई हो रही थी? उन्हें लड़ने से किसने रोका?

(vi) बिल्लियों का झगड़ा सुनकर बंदर ने क्या फैसला सुनाया?

(vii) बंदर ने तराजू का प्रयोग कर बिल्लियों को कैसे मूर्ख बनाया?

(viii) बिल्लियों द्वारा रोटी का बचा-खुचा टुकड़ा माँगने पर बंदर ने क्या कहा?

(ix) आपस में झगड़ा करने से बिल्लियों को क्या हानि हुई?

(x) 'बंदर-बॉट' नाटक से हमें क्या शिक्षा मिलती है?

वाक्यों का क्रम सही करके लिखो—

(i) लगी बिल्ली काली को भूख थी।

(ii) था बंदर चालाक बड़ा।

(iii) महक बिल्ली को आई थी रोटी की।

(iv) रोटी खा ली सारी बंदर ने।

शिक्षा एवं प्रशिक्षण आंचलिक संस्थान, चंडीगढ़

कक्षा 3 - हिन्दी

पाठ 9 कब आऊँ

१. शब्दों को सही अर्थ से मिलाओ ।

बुलंद	गुण
हुनर	जलन
प्रशंसा	ऊँची
ईर्ष्या	उत्तर
जवाब	तारीफ

२. रिक्त स्थान भरो ।

- क) एक सप्ताह में ----- दिन होते हैं ।
ख) एक साल में ----- महीने होते हैं ।
ग) एक महीने में ----- दिन होते हैं ।

खंड ब

३. शब्द बनाओ – जैसे रंग – रंगाई

साफ़	-----
चढ़	-----
बुन	-----

४. सप्ताह के दिन के नाम लिखिए ।

५. सेठ ने किस रंग में कपड़ा रंगने को कहा ?

६. अवन्ती ने कपड़ा अलमारी में क्यू बंद कर दिया ?

७. सेठ कपड़ा लेने किस दिन आया था ?

८. अवन्ती ने कौन सी दुकान खोली ?

९. वचन बदलो |

दरवाज़ा ----- टुकड़ा ----- कपड़ा -----

१०. विलोम शब्द लिखो |

पसंद x ----- खुश x ----- काला x ----- भलाई x -----

११ उचित विराम चिन्ह लगाओ |

क. एक सेठ को बहुत ईर्ष्या होने लगी

ख. फिर उस सेठ ने दोबारा अवन्ती की दुकान में घुसने की हिम्मत नहीं की

ग. सेठ को अवन्ती से ईर्ष्या क्यों थी

खंड क

१२ वाक्य बनाओ |

क) बुलंद -----

ख) दुकान -----

ग) पसंद -----

१३ अवन्ती के बारे में पाँच वाक्य लिखो |

शिक्षा एवं प्रशिक्षण आंचलिक संस्थान, चंडीगढ़

कक्षा 3 - हिन्दी

पाठ 10 क्योंजीमल और कैसे कैसलिया

खंड अ

१ . सही सही मिलान करो –

आटा	चपाती
सब्ज़ी	दाल
गिलास	परात
कुक्कर	चाकू
तवा	पानी

२ . अनाजो के नाम लिखो जिनसे रोटी बनती है ।

क ----- ख ----- ग -----

३ . क्योंजीमल के दोस्त का नाम लिखो ।

खंड ब

४ . गुरुजी थैली में क्या लिए जा रहे थे ?

५ . शिवदास ने गुरुजी को गाड़ी क्यों दे दी ?

६ . क्योंजीमल और कैसे कैसलिया का ये नाम क्यों पड़ा ?

७ . शब्दों का वाक्य में प्रयोग करो । क) चक्की -----

ख) मुलाकात -----

ग) साइकिल -----

८ . वाक्यांश के लिए एक शब्द लिखो ।

क) जहाँ गेहूँ पीसा जाता है -----

ख) जहाँ सब्जी मिलती है -----

ग) जहाँ बच्चों को पढ़ाया जाता है -----

घ) जहाँ मरीज़ों की देखभाल होती है -----

९ . विलोम शब्द लिखो –

हल्की x ----- कुशबू x ----- नीचे x ----- मूर्ख x -----

सुबह x ----- प्रश्न x -----

१० . सही शब्दों पर गोला लगाओ ।

क) गेहूँ गेहूँ

ख) चक्की चक्की

ग) थैली थौली

घ) चुटकी चूटकी

ङ) सानेंगे सानेगे

खंड –क

११ . ऐसे दो शब्द लिखो जिनमें

क) 'क्क' हो - मक्की , -----

ख) 'प्प' हो - ----- , -----

ग) 'च्च' हो - ----- , -----

घ) 'म्म' हो - ----- , -----

१२ . रोटी कैसे बनती है

शिक्षा एवं प्रशिक्षण आंचलिक संस्थान, चंडीगढ़

कक्षा 3 - हिन्दी

पाठ 11 मीरा बहन और बाघ

खंड अ

१ . गांधीजी की इस्तेमाल की गई कोई दो वस्तुओं का चित्र बनाओ ।

२ . रिक्त स्थान भरो ।

क) मीरा बहन का जन्म ----- में हुआ था ।

ख) पिंजड़े के अंदर एक ----- बाँधी ।

ग) मीरा बहन पर ----- के विचारों का काफी असर पड़ा ।

घ) पहाड़ी गाँवों में अक्सर ----- का डर बना रहता है ।

३ . चार पालतु पशुओं के नाम लिखो ।

खंड ब

४ . मीरा बहन के आश्रम का नाम क्या था और आश्रम कहाँ था ?

५ . पिंजड़े के पास पहुँचकर लोग चकित क्यों थे ?

६ . लोग मीरा बहन के पास क्यों गए ?

७ . पिंजड़ा बिना बाघ के बंद हो गया । कैसे ?

८ . बाघ को पकड़ने के लिए गाँव वालों की योजना क्या थी ?

९ . छह जंगली जानवरों के नाम लिखो ।

१० . जानवरों की बोलियाँ लिखिए ।

भैंस -----

घोड़ा -----

हाथी -----

बकरी -----

११ . वचन बदलो

क) विचार ----- ख) जानवर ----- ग) बकरी -----

घ) गाँव -----

१२ . चार नाम वाले शब्द लिखो ।

खंड क

१३. बाघ के बारे में पाँच वाक्य लिखो ।

१४. वाक्य बनाओ ।

क) चकित -----

ख) शिकार -----

ग) धोखा -----

शिक्षा एवं प्रशिक्षण आंचलिक संस्थान, चंडीगढ़

कक्षा 3 - हिन्दी

पाठ 12 जब मुझको साँप ने काटा

खंड - अ

१ शब्दों को उनके अर्थ से मिलाओ।

अहाता	ततैया
असर	प्रभाव
बर्	आवरण
अद्भुत	आँगन
खोल	चिल्लाना
चीख	अनोखा

२. ऐसे शब्द लिखो जो दो दो बार बोले जाते है ।

जैसे : - धीरे -धीरे

खंड ब

३. वाक्यांश के लिए एक शब्द लिखो ।

क) जो बीमारी का इलाज करें -----

ख) जो बागवानी करें -----

ग) जो झाड़ - फूँक करें -----

घ) जो बच्चों को पढ़ता हो -----

ड.) जो पूजा - पाठ करवाता हो -----

४. तीन ऐसे जीव जंतुओं के नाम लिखो जो डंक मारते हों ।

५. तीन ऐसे जंतुओं के नाम लिखो जो डंक नहीं मारते ।

६. किसे क्या कहते हैं ?

क) माँ के पिता जी को -----

ख) माँ की माता जी को -----

ग) पापा के पिता जी को -----

घ) माँ के भाई को -----

ड.) पापा की माता जी को -----

च) पापा की बहन को -----

७. सही शब्द चुनकर खाली स्थान भरो ।

क) साँप ----- रेंग रहा था । (तेज़ी से , धीरे – धीरे)

ख) ----- तुरंत दौड़े आए और मेरी उँगली को देखा । (पड़ोसी , नाना)

ग) साँप ----- के एक खोल में घुसकर छिप गया । (नारियल , घड़े)

घ) इस बच्चे को ----- ने काट लिया है । (बिच्छू , साँप)

ड.) नाना ने उसके लिए बहुत सी ----- भेंट में भेजीं । (घड़ियाँ , चीज़ें)

८. वाक्यों में विराम चिह्न लगाओ ।

क) वाह क्या खीर बनी है

ख) सुमन कहाँ जा रही है

खंड क

९. साँप के बारे में पाँच वाक्य लिखो ।

१०. शब्दों को सही करके लिखो ।

क) ड़झा – कफू----- ख) उगली - ----- ग) झोपडी -----

शिक्षा एवं प्रशिक्षण आंचलिक संस्थान, चंडीगढ़

कक्षा 3 - हिन्दी

पाठ 13 मिर्च का मज़ा

खंड अ

१. कविता की पंक्ति पूरी करो ।

क) सोचा क्या ----- खाने से बल होगा ; यह जरूर इस मौसिम का ----- होगा ।

ख) लाल – लाल पतली -----अगर खाने की तो हमको दो -----
-----चार आने की ।

२. समझकर लिखो ।

जैसे :- काबुल में रहने वाला – काबुलीवाला

क) नेपाल में रहने वाला - -----

ख) जापान में रहने वाला -----

ग) भारत में रहने वाला -----

घ) बिहार में रहने वाला -----

खंड ब

३. दो चीज़ों के नाम लिखो जो खाने में तीखी हों ।

४. दो चीज़ों के नाम लिखो जो खाने में मीठी हों ।

५. एक ही शब्द के दो अलग – अलग अर्थ लिखो ।

जैसे : – जल –पानी , जल – जलना

क) फल ----- फल -----

ख) आम ----- आम -----

ग) उत्तर ----- उत्तर -----

घ) हार ----- हार -----

ङ) पर ----- पर -----

६. किन चीज़ों को देखकर तुम्हारे मुँह में पानी आ जाता है ?

७. प्रश्नों के उत्तर दो ।

क) काबुलीवाला कहाँ का रहने वाला था ?

ख) उसने इतनी सारी मिर्च क्यों खरीद ली ?

ग) मिर्च खाते ही उसे क्या हुआ ?

घ) उसे मिर्च खाने से किसने रोका ?

खंड - स

८. शब्दों के अर्थ लिखो ।

क) कूँजड़िन ----- ख) चवन्नी ----- ग) फ़कत -----

घ) छीमी -----

९. हाँ या ना में उत्तर दो ।

क) मिर्च देखकर काबुलीवाले के मुँह में पानी आ गया । -----
लाल मिर्च को फल समझ लिया । -----

ख) काबुलीवाले ने

ग) उसने पूरे एक रुपये की मिर्च खरीदी । -----

घ) मिर्च खाकर उसकी जीभ जल गई । -----

शिक्षा एवं प्रशिक्षण आंचलिक संस्थान, चंडीगढ़

कक्षा 3 - हिन्दी

पाठ 14 सबसे अच्छा पेड़

खंड अ

१. नारियल के पेड़ का चित्र बनाकर रंग भरो ।

२. तीन गुठली वाले फलों के नाम लिखो ।

३. दो बिना गुठली वाले फलों के नाम लिखो ।

खंड ब

४. किन पेड़ों के पत्तियों का इस्तेमाल इन दिये हुए मौको पर करोगी ।

क) मेहमान को खाना खिलाने के लिए -----

ख) बारिश में भीगते समय छाते की तरह -----

ग) रंग बनाने के लिए -----

घ) गर्मी से परेशान होकर पंखा करने के लिए -----

५. प्रश्नों के उत्तर लिखो ।

क) तीनों भाई किस चीज़ की तलाश में घर से निकले ?

ख) तीनों सबसे पहले कहाँ आराम करने बैठे ?

ग) कौन से भाई को आम का पेड़ पसंद आया ?

घ) दूसरे भाई ने कहाँ रहने का फैसला किया ?

६. सही मिलान करो ।

क) चटाई	नीम का पेड़
ख) रबड़	आम का पेड़
ग) अचार	नारियल का पेड़
घ) दातुन	रबड़ का पेड़

७. शब्द चुनकर रिक्त स्थान भरो

बादल, सड़क, आम, झोंपड़ी, नारी

क) गरम गरम धूप में वे ----- पर चलते गए।

ख) कुछ ----- हम बाद में खाने के लिए सुखाकर रख लेंगे ।

ग) तभी आसमान से एक काला ----- गुज़रा ।

घ) मैं नारियल की ----- खा सकता हूँ ।

ड.) दूसरे भाई ने वहीं अपनी ----- बना ली ।

८. शब्दों का वाक्य प्रयोग करो ।

क) तलाश -----

ख) छाँह -----

ग) जटाएँ -----

खंड स

९. वृक्ष हमारे मित्र विषय पर आठ पंक्तियाँ लिखो।

शिक्षा एवं प्रशिक्षण आंचलिक संस्थान, चंडीगढ़

कक्षा 3 - हिन्दी

पाठ 15 पत्तियों का चिड़ियाघर

खंड अ

१. पंक्तियाँ पूरी करो ।

क) पेड़ों के कपड़े -----

पेड़ -----

पेड़ों के ----- होते

-----सस्ते – सस्ते

ख) होते हैं ----- पत्ते

उनकी ----- जुबान

कोई ----- चेहरा

-----चोटी की शान

खंड ब

२. निम्नलिखित प्रश्नों के उत्तर दो –

क) पेड़ क्या पहनते हैं ?

ख) क्या पत्तों में जान होती है ?

ग) पत्ते किस आकार के होते हैं ?

घ) क्या पत्ते एक ही रंग के होते हैं ?

ड.) क्या तुम्हें पेड़ – पौधों से प्यार है ?

३. मिलते – जुलते शब्द बनाओ –

क) बस्ता ----- ख) प्रकार ----- ग) हँसी -----

घ) मित्र----- ड.) शान ----- च) खास -----

छ) मूँछ ----- ज) चोटी -----

४. निम्नलिखित प्रश्नों का एक शब्द में उत्तर दो –

क) किस पत्ते का प्रयोग दक्षिण भारत की हर सब्ज़ी या दाल आदि में किया जाता है ?

ख) किस पत्ते को उबाल कर देने से सर्दी – खाँसी जैसी बीमारियाँ दूर हो जाती हैं ?

ग) कौन – से पत्ते को मुँह लाल करने के लिए खाया जाता है ?

घ) किन – किन पौधों के पत्तों की चटनी बनाई जाती है ?

ड.) झाड़ू बनाने में किन – किन पेड़ों के पत्तों का प्रयोग किया जाता है ?

च) किन पत्तों से साग – सब्ज़ी बनाई जाती है ?

खंड क

४. वाक्य बनाओ –

क) अखबार -----

ख) मित्र -----

ग) दिलचस्प -----

घ) जुबान -----